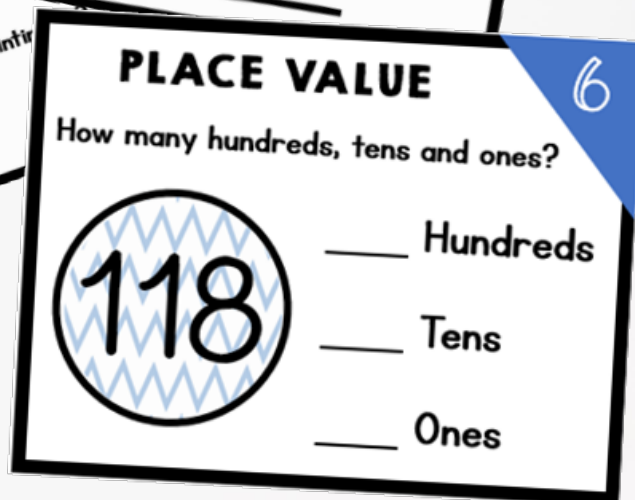
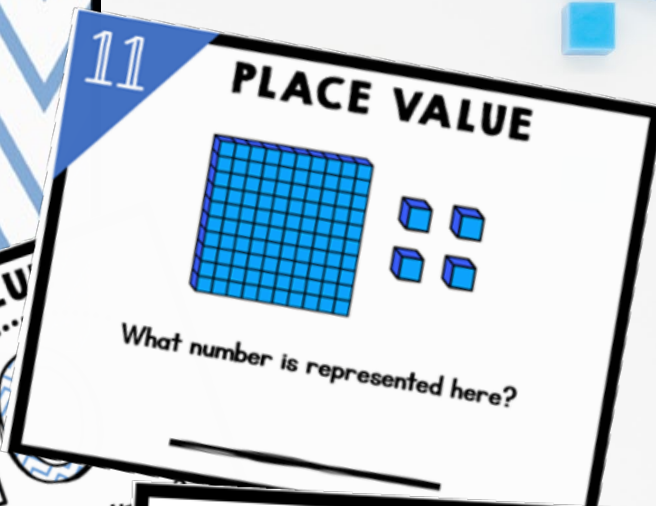


PLACE VALUE

task cards



2nd GRADE



Print & Digital
(Google &
Boom Cards™)




Print

PLACE VALUE

11

PLACE VALUE



What number is represented here?

19

PLACE VALUE

390

What place value is the arrow pointing to?

- a. hundreds
- b. tens
- c. ones

PLACE VALUE

6

How many hundreds, tens and ones?

118

___ Hundreds

___ Tens

___ Ones

3

PLACE VALUE

4 6 9

What is the value of the underlined number?

6

60



600

Boom Learning

- Audio
- Self Grading
- Teacher Data



Preview

6

PLACE VALUE

How many hundreds, tens and ones?

118

| | |
|---|----------|
| 1 | Hundreds |
| | Tens |
| | Ones |

Overview

First

Previous

Skip

Give up

Submit