




Telling Time to 5 Minutes

2.MD.C.7

Explore

The 3 Little Pigs wrote the time for each clock. Put a check mark next to the pig who wrote the correct answer.

Clock	Pig	Time	Correct
		1:20	<input type="checkbox"/>
		4:01	<input type="checkbox"/>
		4:05	<input checked="" type="checkbox"/>
		8:40	<input type="checkbox"/>
		7:40	<input checked="" type="checkbox"/>
		7:08	<input type="checkbox"/>



Digital Lesson & Printable Recording Sheet

Vocabulary

Match the vocabulary card to the definition.

A.M.



The morning hours
from 12:00am -
12:00pm.

Analog Clock



A type of clock shaped
like a circle with hands
that rotate and point to
numbers.

P.M.



The afternoon and
evening hours from
12:00pm - 12:00am.

Digital Clock





A type of clock that
digitally displays the
time in numbers.

Let's Watch!

Watch the videos to learn about the analog clock and telling time to the hour.



CENTIMETERS 2 3



Explore

Look at the pictures of the activities. Drag and drop A.M. next to the activities you do then and P.M. next the activities you would do then. If you do the activity during both the A.M. and the P.M., write both.



Go to sleep.

P.M.



Get dressed.

Both



Eat breakfast.

A.M.



Brush teeth.

Both

Explore

These clocks all show time to the hour. Look at the number the hour hand is pointing to and match the clock to the time.



11:00



3:00



6:00



1:00

CENTIMETERS 2 3

20 21 22 23 24 25 26 27

Explore

Tanner has a chart to show what time he can do different activities throughout his day. Drag and drop the time and if it is AM or PM next to each clock.



7:45

A.M.



12:15

P.M.



8:00

A.M.



3:25

P.M.

CENTIMETERS 2 3

20 21 22 23 24 25 26 27

120 130 140 150 160 170 180
0 INCHES
1 2 3 4 5 6 7 8 9 10

Name: _____ Date: _____

Telling Time Lesson Recording Sheet: Day 1

Vocabulary: Match the vocabulary words to the definition.

A.M.

The morning hours from 12:00am - 12:00pm.

P.M.

A type of clock shaped like a circle with hands that rotate and point to numbers.

Analog Clock

The afternoon and evening hours from 12:00pm - 12:00am.

Digital Clock

A type of clock that digitally displays the time in numbers.

Telling Time

There are:

_____ a day.

_____ in an hour.

_____ in a minute.

Each day is split into
A.M. and P.M.

_____ is
the morning
time from
midnight until
noon. (12
hours).

_____ is
from noon
until midnight.
(12 hours).

Name: _____ Date: _____

Telling Time Lesson Recording Sheet: Day 1

Explore: Look at the pictures of the activities. Drag and drop A.M. next to the activities you do then and P.M. next to the activities you would do then. If you do the activity during both the A.M. and the P.M., write both.



Go to sleep.



Get dressed.



Eat breakfast.



Brush teeth.

Explore: These clocks all show time to the hour. Look at the number the hour hand is pointing to and write the time under the clock.

