

2.MBT.B.6

ADDING FOUR 2 DIGIT NUMBERS

TASK CARDS

ANSWER SHEET

Name: _____ Date: _____

Card#	Answer
1.	
2.	
3.	
4.	
5.	
6.	
7.	

5

TWO-DIGIT ADDITION

Tens	Ones
2	1
3	6
4	0
+	2
2	2

a. 99
b. 109
c. 119

6

TWO-DIGIT ADDITION

Tens	Ones
6	8
	7
+	1
2	3

a. 99
b. 109
c. 119

7

TWO-DIGIT ADDITION

Tens	Ones
1	7

a. 99

8

TWO-DIGIT ADDITION

Tens	Ones
1	

a. 45

29

TWO-DIGIT ADDITION

There are 4 pizzas cut into 12 slices each. How many slices of pizza are there in all?

25

TWO-DIGIT ADDITION

a's family wants to adopt a puppy! It costs \$12 to adopt it, \$36 for a collar and leash. How much do they need to a


Star rating: ★★☆☆☆☆☆☆

Add.

Tens	Ones
2	1
2	2
2	3
+	2
2	4

80
93
90

Adding Up to Four Two-Digit Numbers



PRINTABLE AND DIGITAL



- 30 PRINT-AND-GO TASK CARDS
- READY TO USE FOR CENTERS

ANSWER SHEET

Name: _____ Date: _____

Card#	Answer	Card#	Answer
1.		16.	
2.		17.	
3.		18.	
		19.	
		20.	
		21.	
		22.	
		23.	
		24.	
		25.	



9 TWO-DIGIT ADDITION

Tens	Ones
1	8
	7
2	3
4	1

+ a. 89
 b. 99
 c. 98

10 TWO-DIGIT ADDITION

Tens	Ones
2	1
2	2
2	3
2	4

+ a. 80
 b. 93
 c. 90

11 TWO-DIGIT ADDITION

Pick two of the numbers to add first. Then, add the third one.

$28 + 12 + 37$

12 TWO-DIGIT ADDITION

Pick two of the numbers to add first. Then, add the third one.

$45 + 19 + 21$

25 TWO-DIGIT ADDITION

Keila's family wants to adopt a puppy! It costs \$12 to adopt it, \$36 for a kennel, \$20 for dog food, and \$28 for a collar and leash. How much money do they need to adopt a puppy?

26 TWO-DIGIT ADDITION

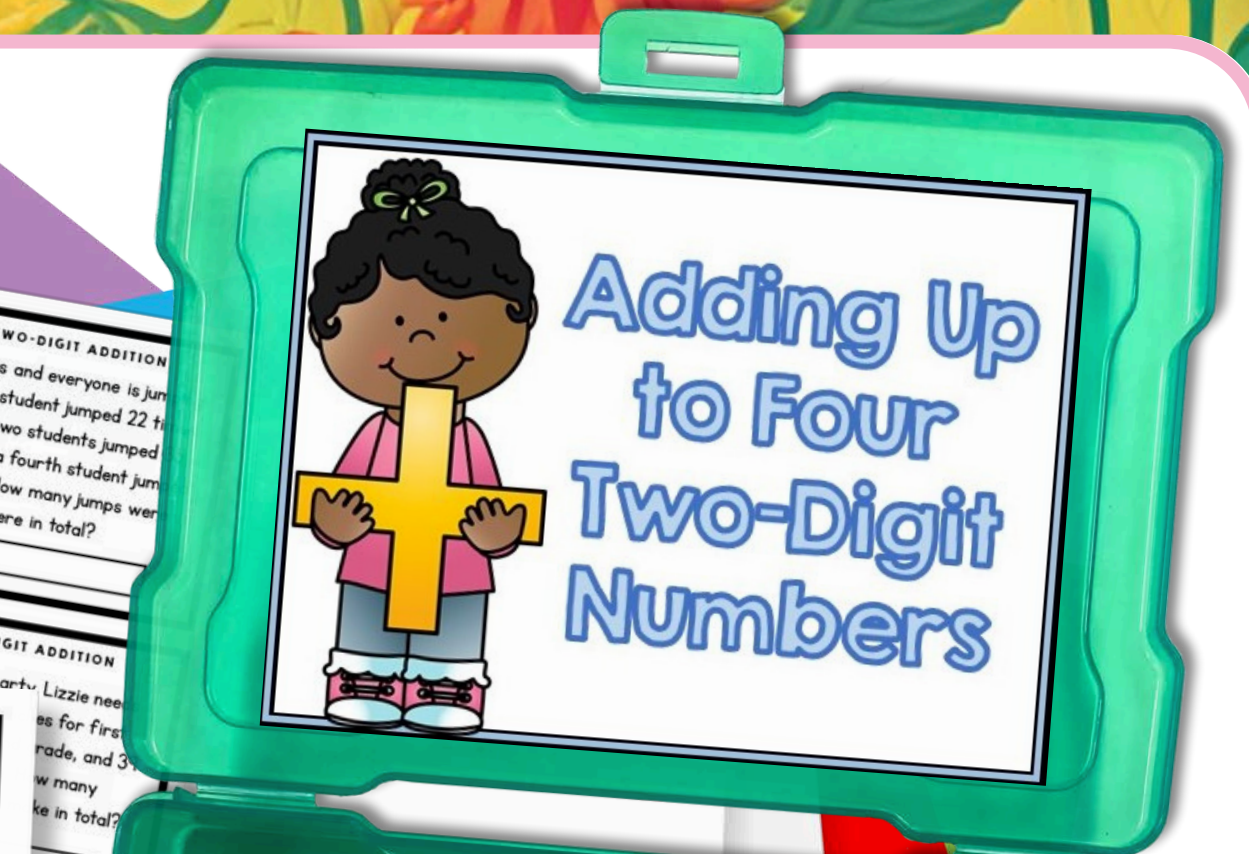
It's recess and everyone is jumping rope! One student jumped 22 times, another two students jumped 19 times, and a fourth student jumped 19 times. How many jumps were there in total?

27 TWO-DIGIT ADDITION

José has 10 chocolates, and his mom gave him 14 more. Paula has 12 chocolates, and his dad gave her 15 more. How many chocolates do they have in total?

28 TWO-DIGIT ADDITION

For the school party, Lizzie needs to buy 12 packs of paper, 15 packs of markers, and 10 packs of crayons. How many packs does she need in total?



Ways to Use Task Cards

- Centers
- Scout: Pass out one card for each student. Set a timer and say, "scout!" when the timer goes off. Students move seats to the next card. They continue to rotate until they are back at their original seat.
- Scavenger Hunt: Hide cards around the room. Students search for cards and answer them.
- Jenga: Number Jenga blocks. Students stack the blocks, then take turns pulling blocks. Students answer the corresponding number card.
- Whole class practice: Teacher displays card on the projector. Students answer on mini white boards.
- Exit Tickets: Give each student a task card at the end of the lesson. Have them answer on a sticky note.



SELF CORRECTING, INCLUDES REPORTING CERTIFICATE

1 TWO-DIGIT ADDITION

Tens	Ones
2	8
1	1

a. 3
b. 1
c.

3 TWO-DIGIT ADDITION

Tens	Ones
7	1
	4
1	3

13 TWO-DIGIT ADDITION
Pick two of the numbers to add first. Then, add the third one.

14 TWO-DIGIT ADDITION
Pick two of the numbers to add first. Then, add the third one.

$$56 + 11 + 39$$

+

TWO-DIGIT ADDITION
Divide the numbers in two addition sentences. Then, add both totals.

$$12 + 26 + 18 + 31$$

1	

+

2	

=

--

INCORRECT

The correct answer is 76 sandwiches.

CONTINUE



SHUFFLES CARDS, SO STUDENTS CAN PRACTICE MORE THAN ONCE

5 TWO-DIGIT ADDITION
Keila's family wants to adopt a puppy!
It costs \$12 to adopt it, \$36 for a kennel, \$20 for dog food, and \$28 for a collar and leash.

26 TWO-DIGIT ADDITION
It's recess and everyone is jumping rope! One student jumped 22 times. Another student jumped 35 times.

ANSWER SHEET

Name: _____

Card#	Answer	Card#
1.		
2.		
3.		
4.		

It's recess and everyone is jumping rope! One student jumped 22 times. Another two students jumped 35 times, and a fourth student jumped 19 times. How many jumps were there in total?

TWO-DIGIT ADDITION

1 a. 80

2 b. 93

3

4 c. 90

TWO-DIGIT ADDITION


Divide the numbers in two addition sentences. Then, add both totals.

$$12 + 26 + 18 + 31$$

2

TWO-DIGIT ADDITION CHALLENGE

How much is _____ doubled + 25 doubled



STANDARDS ALIGNED

27

TWO-DIGIT ADDITION

José has 10 chocolates, and his mom gave him 14 more. Paula has 11 chocolates, and her mom gave her 20 more. They want to know how many chocolates do they have altogether.

8

TWO-DIGIT ADDITION

	Tens	Ones
	1	0
+	1	1
	1	2
	1	3

a. 45

b. 46

c. 47

3

TWO-DIGIT ADDITION

	Tens	Ones
	7	1
+	1	4
	1	3

a. 89

b. 103

c. 98

16

TWO-DIGIT ADDITION

Divide the numbers in two addition sentences. Then, add both totals.

$$12 + 26 + 18 + 31$$



1	2

$$+ \begin{array}{r} \square \\ \square \\ \square \\ \square \\ \square \end{array} = \square$$

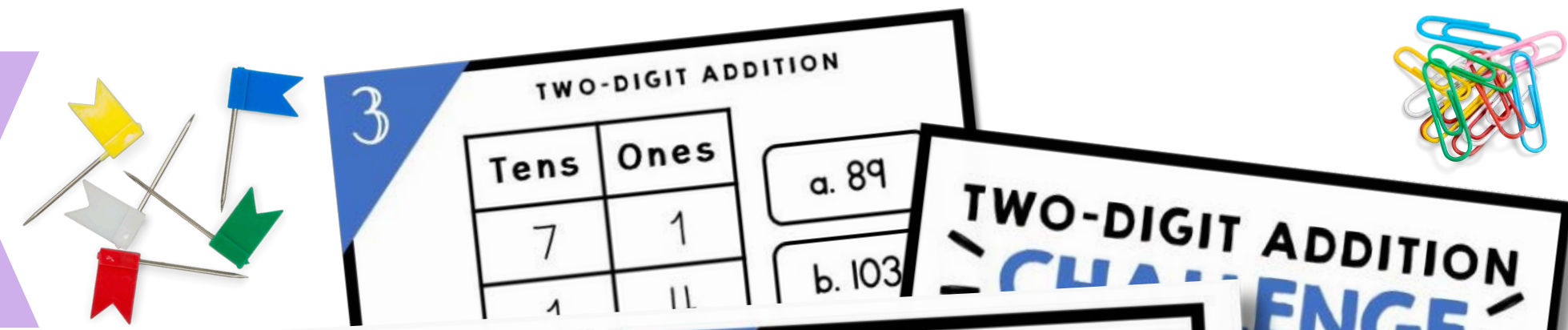
29

TWO-DIGIT ADDITION

There are 4 pizzas cut into 12 slices each. How many slices of pizza are there in all?



USE OVER AND OVER FOR CENTERS, GAMES, AND REVIEW



ANSWER SHEET

Name: _____ Date: _____

Card#	Answer	Card#
16.		
17.		
18.		
19.		
20.		
21.		
22.		
23.		
24.		

ANSWER SHEET

Date: _____ Answer: _____

3 TWO-DIGIT ADDITION

Tens	Ones
7	1
1	11

a. 89
b. 103

TWO-DIGIT ADDITION CHALLENGE

ch is 15 doubled?

21 TWO-DIGIT ADDITION

Judith has 17 blue blocks, 23 red blocks, 40 green blocks and 10 black blocks. How many blocks does Judith have in all?

22 TWO-DIGIT ADDITION

It's time to pay Misael's allowance for the month! He earned \$19 for cleaning his room, \$24 for doing the dishes, \$30 for taking care of his baby sister, and \$16 for putting away the groceries. How much is Misael's allowance?

$\$19 + \$24 + \$30 + \$16 = \$$

17 TWO-DIGIT ADDITION

Divide the numbers in two addition sentences. Then, add both totals.

$38 + 11 + 12 + 33$

1	2
+ <input type="text"/>	+ <input type="text"/>
3 <input type="text"/>	<input type="text"/>

18 TWO-DIGIT ADDITION

Divide the numbers in two addition sentences. Then, add both totals.

$31 + 32 + 33 + 34$

1	2
+ <input type="text"/>	+ <input type="text"/>
3 <input type="text"/>	<input type="text"/>

24 TWO-DIGIT ADDITION

Rosa is counting the books on her bookshelf. She has 14 on the first shelf, 21 on the second, 26 on the third, and 10 on the fourth. How many books does she have in all?

19 TWO-DIGIT ADDITION

Divide the numbers in two addition sentences. Then, add both totals.

$47 + 6 + 18 + 25$

1	2
+ <input type="text"/>	+ <input type="text"/>
3 <input type="text"/>	<input type="text"/>

20 TWO-DIGIT ADDITION

Divide the numbers in two addition sentences. Then, add both totals.

$40 + 11$

1	
+ <input type="text"/>	+ <input type="text"/>
3 <input type="text"/>	<input type="text"/>

TWO-DIGIT ADDITION

Tens	Ones
1	0
1	1
1	2
1	3

TWO-DIGIT ADDITION

ates, and his mom e. Paula has 11 nom gave her 20 more. They want to know how many chocolates do they have altogether.



A digital platform that empowers teachers and parents to transform learning through virtual exploration.

WHAT'S INSIDE?

Unlimited access to over 1,000 digital interactive resources for a variety of subjects, topics, and seasons.



START YOUR 10 DAY FREE TRIAL!



MAGICCOREACADEMY.COM

