

2.OA.A.2

FLUENTLY ADD AND SUBTRACT

TASK CARDS



ANSWER SHEET

Card#	Answer
1.	
2.	
3.	
4.	
5.	
6.	
7.	

17 FLUENTLY ADD & SUBTRACT
Write an addition equation that matches the drawing.

$\square + \square = \square$

18 FLUENTLY ADD & SUBTRACT
Write two subtraction sentences with the number bond.

$\square - \square = \square$
 $\square - \square = \square$

7 FLUENTLY ADD & SUBTRACT
Choose the number sentence that has the same difference as this one.

$14 - 9 = \square$

$\square - 10$ $15 - 8$

19 FLUENTLY ADD & SUBTRACT
Write two subtraction sentences with the number bond.

$\square - \square = \square$
 $\square - \square = \square$

20 FLUENTLY ADD & SUBTRACT
Write two subtraction sentences with the number bond.

$\square - \square = \square$
 $\square - \square = \square$

★ ★ ★ ★ ★ ★ ★ ★

Choose the number sentence that has the same difference as this one.

$15 - 5 = \square$

$\square - 1$ $10 - 1$ $9 - 1$

FLUENCY CHALLENGE

Complete the number sentence.

$19 - \square = \square$

Fluently Add & Subtract

FLUENTLY ADD & SUBTRACT
Count on to add.

$12 + \square = \square$

PRINTABLE AND DIGITAL



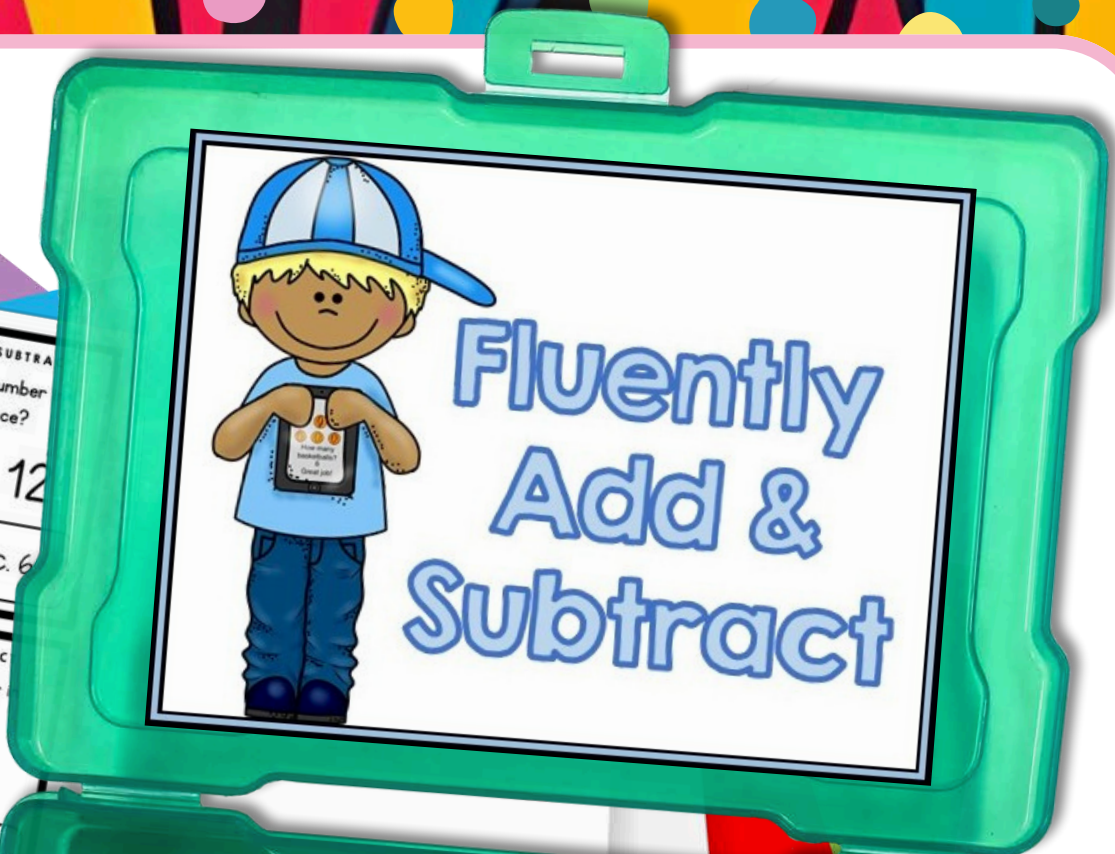
- 30 PRINT-AND-GO TASK CARDS
- READY TO USE FOR CENTERS

21 FLUENTLY ADD & SUBTRACT
Write two subtraction sentences with the number bond.

22 FLUENTLY ADD & SUBTRACT
What is the missing number in the number sentence?
 $17 - \underline{\quad} = 12$
a. 4 b. 5 c. 6

23 FLUENTLY ADD & SUBTRACT
What is the missing number in the number sentence?

24 FLUENTLY ADD & SUBTRACT
What is the missing number?



ANSWER SHEET

Name: _____ Date: _____

Card#	Answer	Card#	Answer
1.		16.	
2.		17.	
3.		18.	
		19.	
		20.	
		21.	
		22.	
		23.	
		24.	
		25.	



1 FLUENTLY ADD & SUBTRACT
Choose the number sentence that has the same sum as this one.

$10 + 8 = \underline{\quad}$

7 + 7 8 + 8 9 + 9

2 FLUENTLY ADD & SUBTRACT
Choose the number sentence that has the same sum as this one.

$9 + 4 = \underline{\quad}$

10 + 3 10 + 4 10 + 5

3 FLUENTLY ADD & SUBTRACT
Choose the number sentence that has the same sum as this one.

$3 + 5 = \underline{\quad}$

5 + 3 4 + 3 3 + 3

4 FLUENTLY ADD & SUBTRACT
Choose the number sentence that has the same sum as this one.

$5 + 5 = \underline{\quad}$

8 + 3 8 + 2 8 + 1

Ways to Use Task Cards


- Centers
- Scoot: Pass out one card for each student. Set a timer and say, "scoot!" when the timer goes off. Students move seats to the next card. They continue to rotate until they are back at their original seat.
- Scavenger Hunt: Hide cards around the room. Students search for cards and answer them.
- Jenga: Number Jenga blocks. Students stack the blocks, then take turns pulling blocks. Students answer the corresponding number card.
- Whole class practice: Teacher displays card on the projector. Students answer on mini white boards.
- Exit Tickets: Give each student a task card at the end of the lesson. Have them answer on a sticky note.



SELF CORRECTING, INCLUDES REPORTING CERTIFICATE

17 FLUENTLY ADD & SUBTRACT

Write an addition equation that matches the drawing.



+ =

25 FLUENTLY ADD & SUBTRACT

What is the missing number in the number sentence?

+ 20 = 20

a. 2 b. 1 c. 0

26 FLUENTLY ADD & SUBTRACT

What is the missing number in the number sentence?

+ 20 = 20

a. 2 b. 1 c. 0

19 FLUENTLY ADD & SUBTRACT

Write two subtraction sentences with the number 8.

8 - =

- =


INCORRECT

The correct answer is $12 - 4 = 8$ & $12 - 8 = 4$.

CONTINUE

FLUENTLY ADD & SUBTRACT

Count on to add.

4 +  =



SHUFFLES CARDS, SO STUDENTS CAN PRACTICE MORE THAN ONCE

1
FLUENTLY ADD & SUBTRACT
Write two subtraction sentences with the number bond.
(20) $_ - _ = _$

22
FLUENTLY ADD & SUBTRACT
What is the missing number in the number sentence?
 $_ - _ = _$

ANSWER SHEET

Name: _____

Card#	Answer	Card#
1.		
2.		
3.		
4.		



Count the objects, then add them to the number.

$$14 + \text{😊😊😊} = \square$$

FLUENCY CHALLENGE

Complete number bond

19 - $_$

FLUENTLY ADD & SUBTRACT
Write two subtraction sentences with the number bond.
 $_ - _ = _$
 $_ - _ = _$

FLUENTLY ADD & SUBTRACT
Choose the number sentence that has the same sum as this one.
 $+ 5 = _$



STANDARDS ALIGNED

11 FLUENTLY ADD & SUBTRACT

Add the two numbers that make a ten first. Then, add the third one.

$$7 + 8 + 3 = \underline{\quad}$$
$$10 + \square = \square$$

7 FLUENTLY ADD & SUBTRACT

Choose the number sentence that has the same difference as this one.

$$14 - 9 = \underline{\quad}$$

$15 - 10$ $15 - 8$ $13 - 4$

3 FLUENTLY ADD & SUBTRACT

Choose the number sentence that has the same sum as this one.

$$3 + 5 = \underline{\quad}$$

$5 + 3$ $4 + 3$ $3 + 3$

21 FLUENTLY ADD & SUBTRACT

Write two subtraction sentences with the number bond.


$\begin{array}{r} \textcircled{20} \\ \textcircled{6} \quad \textcircled{14} \end{array}$

$$\begin{array}{r} _ - _ = _ \\ _ - _ = _ \end{array}$$

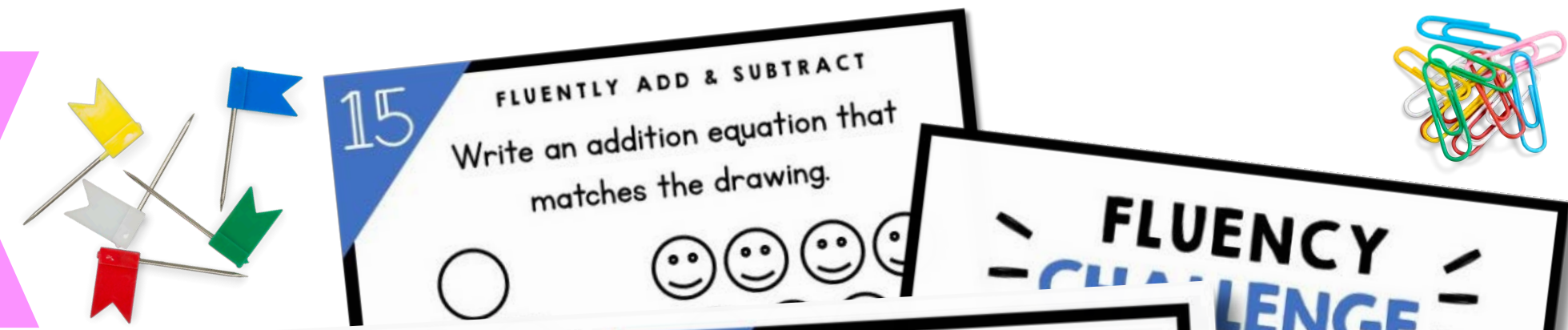
15 FLUENTLY ADD & SUBTRACT

Write an addition equation that matches the drawing.

$\square + \square = \square$



USE OVER AND OVER FOR CENTERS, GAMES, AND REVIEW



ANSWER SHEET

Name: _____ Date: _____

Card#	Answer	Card#
16.		16.
17.		17.
18.		18.
19.		19.
20.		20.
21.		21.
22.		22.
23.		23.
24.		24.
25.		25.
26.		26.
27.		27.
28.		28.
29.		29.
30.		30.

17 FLUENTLY ADD & SUBTRACT
Write an addition equation that matches the drawing.

+ =

18 FLUENTLY ADD & SUBTRACT
Write two subtraction sentences with the number bond.

$9 - \underline{\quad} = \underline{\quad}$
 $9 - \underline{\quad} = \underline{\quad}$

15 FLUENTLY ADD & SUBTRACT
Write an addition equation that matches the drawing.

+ =

10 FLUENTLY ADD & SUBTRACT
Choose the number sentence that has the same difference as this one.

$17 - 7 = \underline{\quad}$

$4 + 4$ $5 + 5$ $6 + 6$

12 FLUENTLY ADD & SUBTRACT
Add the two numbers that make a ten first. Then, add the third one.

$4 + 5 + 6 = \underline{\quad}$

$10 + \square = \square$

FLUENTLY ADD & SUBTRACT
Write two subtraction sentences with the number bond.

$20 - \underline{\quad} = \underline{\quad}$
 $20 - \underline{\quad} = \underline{\quad}$

19 FLUENTLY ADD & SUBTRACT
Write two subtraction sentences with the number bond.

$12 - \underline{\quad} = \underline{\quad}$
 $12 - \underline{\quad} = \underline{\quad}$

20 FLUENTLY ADD & SUBTRACT
Write two subtraction sentences with the number bond.

$6 - \underline{\quad} = \underline{\quad}$
 $6 - \underline{\quad} = \underline{\quad}$

FLUENTLY ADD & SUBTRACT
Write a number sentence that has the same sum as this one.

$5 + 5 = \underline{\quad}$

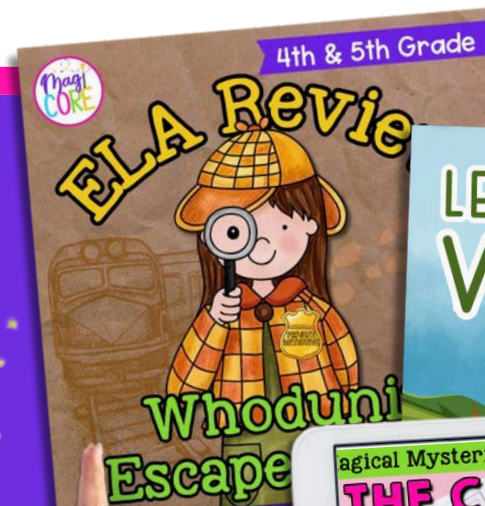
$5 + 3$ $4 + 3$ $3 + 3$



A digital platform that empowers teachers and parents to transform learning through virtual exploration.

WHAT'S INSIDE?

Unlimited access to over 1,000 digital interactive resources for a variety of subjects, topics, and seasons.



START YOUR 10 DAY FREE TRIAL!



MAGICCOREACADEMY.COM

