


# ESCAPE THE SCHOOL MATH REVIEW

2nd Grade



PRINTABLE • GOOGLE • WEBSCAPE™





Dear Student,

It's the last week of school before the summer holiday. You need to be on your best behavior to enjoy the festivities and stay out of detention.

To avoid an end of the year detention, you must:

1. Finish your homework.
2. Ace chemistry class.
3. Dodge the food fight.
4. Pass the test.

After each challenge, add the items to your classroom to escape detention.

**Let's Go!**

# Avoid an end of the year detention!

Students won't realize they are practicing Math Skills! They will be immersed in the storytelling and our original videos as they complete math challenges.

Learn more!

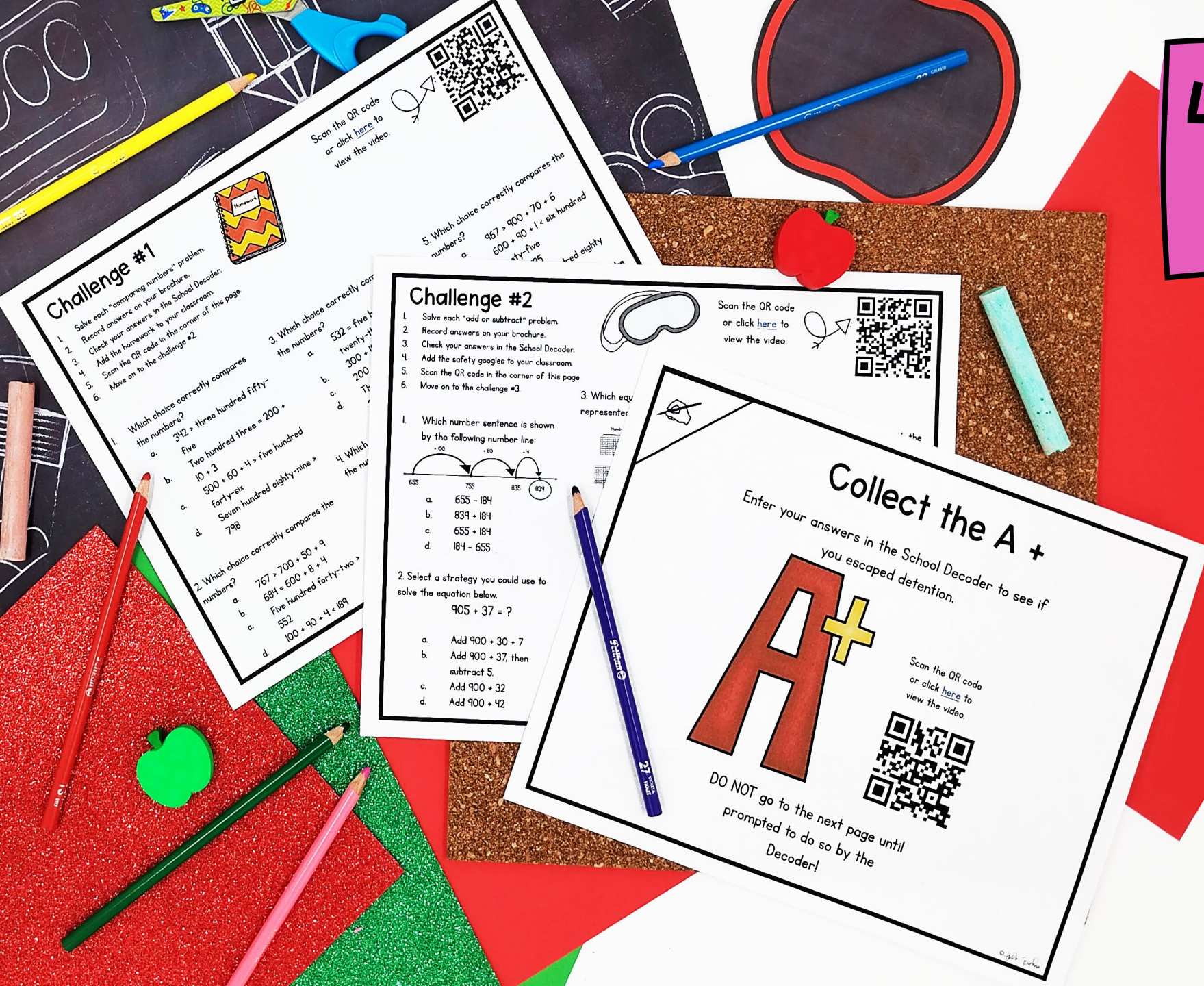





# 4 Mathematics Challenges

- Challenges focused on Graphing Points
- Each challenge takes about 20-30 minutes

Learn more!





# 4 Mathematics Challenges

- Themed videos integrated throughout the Escape Room to keep kids engaged.
- Students work in groups, partners, or independently.

Learn more!





# 3 Versions

- Print
- Google Slides
- Webscape™ (Our most popular experience)

Learn more!



## Compare the Numbers

Which choice correctly compares the numbers?



- a.  $342 >$  three hundred fifty-five
- b. Two hundred three =  $200 + 10 + 3$
- c.  $500 + 60 + 4 >$  five hundred forty-six
- d. Seven hundred eighty-nine  $> 798$

1.



Which choice correctly compares the numbers?

$342 >$  three hundred fifty-five

Two hundred three =  $200 + 10 + 3$

$500 + 60 + 4 >$  five hundred  
forty-six

Seven hundred eighty-nine  $> 798$

## Challenge #1






1. Solve each "comparing numbers" problem.
2. Record answers on your brochure.
3. Check your answers in the School Decoder.
4. Add the homework to your classroom.
5. Scan the QR code in the corner of this page.
6. Move on to the challenge #2.

Which choice correctly compares the numbers?

- a.  $342 >$  three hundred fifty-five
- b. Two hundred three =  $200 + 10 + 3$
- c.  $500 + 60 + 4 >$  five hundred forty-six
- d. Seven hundred eighty-nine  $> 798$

2. Which choice correctly compares the numbers?

- a.  $767 > 700 + 67$
- b.  $684 = 600 + 84$
- c. Five hundred eighty-four  $> 584$
- d.  $100 + 90 = 190$

	<b>PDF</b> 	<b>Google Slides</b> 	<b>Webscape™</b> 
Format Type	Printable	Digital	Digital
Device	N/A	Any Device	Any Device
Required Prep	Print & Go	Copy & Share	Zero Prep
Student Answers	Printable Answer Pamphlet	Google Sheets Decoder Tool	Integrated Challenge Hub
Self Correcting	Includes Answer Key	Self Correcting	Self Correcting
Custom Videos	QR Codes	Embedded You Tube	Embedded
Audio Readings	N/A	No Audio Readings	Contains Audio Readings
Navigation	N/A	Student Directed	Automatically Advancing
Extras	Early Finish Challenges	Movable Pieces	Interactive Animation

## 3 Versions

- Print
- Google Slides
- Webscape™ (Our most popular experience)

*Learn more!*






# Print

- Cut and paste stamps for each challenge
- Easy to follow
- Optimal for group or partner work
- Recording brochure for answers
- Self-checking decoder

Learn more!



At the end of each challenge, Cut out each sticker and paste it on the classroom to stay out of detention and escape the school!

**School Decoder**

Use the following codes for each challenge to solve the clues and move to the next challenge.

**Challenge 1**

question 1	question 2	question 3	question 4	question 5	question 6
a = I let b = I	a = my b = had a = Trevor	a = sister b = to a = if I	a = Ashley b = ask a = could	a = help me b = for help a = borrow	a = with math b = on the bus

**SCHOOL ESCAPE ROOM RECORDING BROCHURE**

Record your challenge answers along your journey.

**CHALLENGE 3**

	Answer	Code
1.	b	By Walking
2.	d	along
3.		
4.		
5.		
6.		

How did you dodge the food fight?

SCHOOL



# Print

- Certificate of completion
- OOPS! Cards for differentiation

Learn more!



## Ooops!

You missed the bus this morning.



YOU MUST STAY QUIET  
MINUTES. NO SPEAK

### A+

## School Escape Room


**Sandra S.**

(name)

has successfully completed the  
challenges and escaped detention.

**03 / 09**

(Date)



*The Principal*

Scan the QR code  
or click [here](#) to  
view the video.



© 2018



# Webscape <sup>TM</sup>

- Most interactive experience
- Self correcting
- Embedded videos
- Embedded audio
- Animation
- Simple navigation

Learn more!





# Webscape <sup>TM</sup>

- No log ins or sign ups
- Works with any device that has an internet connection and web browser
- Zero prep! Just share the link with your students.

*Learn more!*





# Google Slides

- One problems per slide
- Students drag to circle their answers

Learn more!



**Add or Subtract**

Which number sentence is shown by the following number line:

A number line starting at 655, with arrows indicating jumps of +100 to 755, +80 to 835, and +4 to 839. The number 839 is circled in green.

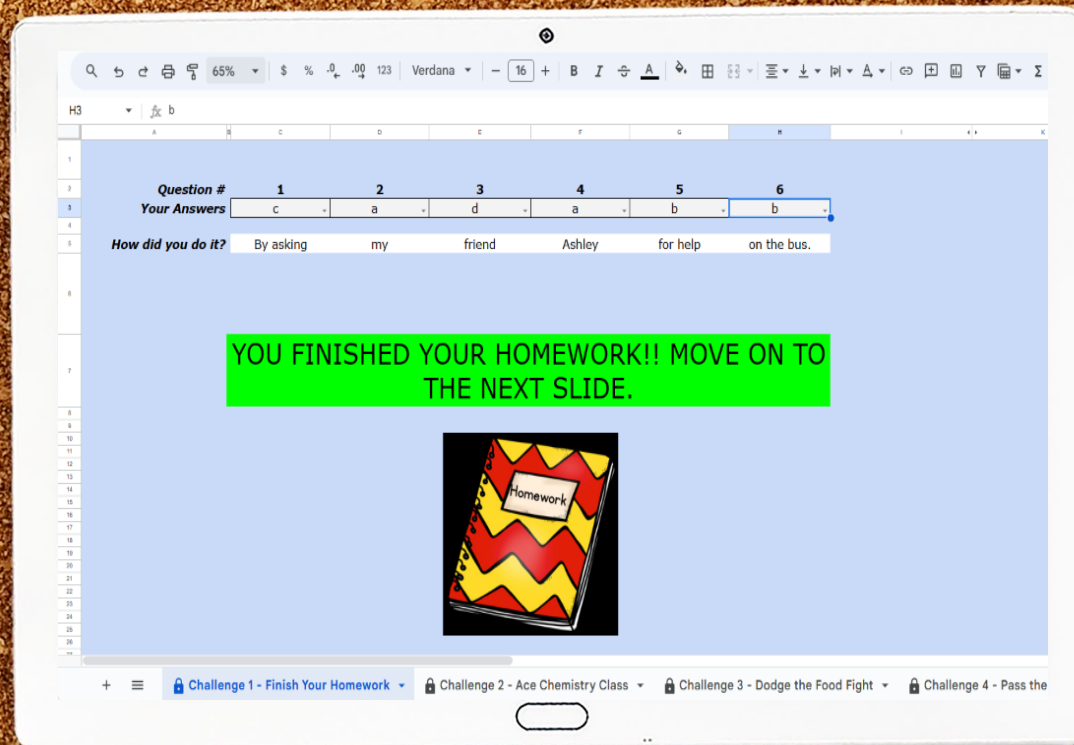
a.  $655 - 184$   
b.  $839 + 184$   
c.  $655 + 184$   
d.  $184 - 655$



# Google Slides

- Toggle to self-checking decoder
- Decoder will prompt at the end of each challenge whether students are correct or need to check their work.

Learn more!





# Looking for More?

