

Measuring Length

2nd GRADE

task cards

1

MEASURING LENGTH

How many paperclips long is the line?
How many cubes long?

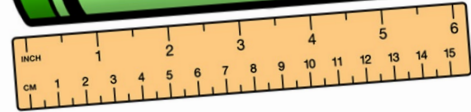


_____ paperclips long _____ cubes long

23

MEASURING LENGTH

Measure the object to the nearest inch.
Then, measure it to the nearest centimeter.

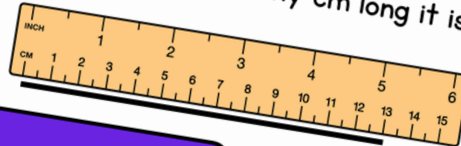


_____ inches long _____ centimeters long

MEASURING LENGTH

MEASURING LENGTH

Measure the line using the ruler.
Determine how many cm long it is.



A. 13 cm

B. 5 cm

Print & Digital
(Google &
Boom Cards™)

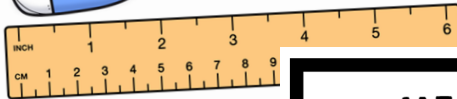
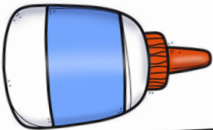


Print

MEASURING LENGTH

22

Measure the object to the nearest inch.
Then, measure it to the nearest centimeter.



_____ inches long _____

20

MEASURING LENGTH

Which line measures 2 inches?



Line A

Line B

Line B


MEASURING LENGTH CHALLENGE

Mr. Murphy's phone is 12 inches long. How much does it measure in feet?

MEASURING

4

How many paperclips long
How many cubes long



_____ paperclips long _____ cubes long

MEASURING LENGTH

Measure the object to the nearest inch.
Then, measure it to the nearest centimeter.



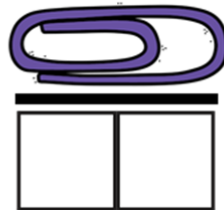
_____ inches long _____ centimeters long

Google Slides

3

MEASURING LENGTH

How many paperclips long is the line?
How many cubes long?



1 paperclips long

2 cubes long

Boom Learning

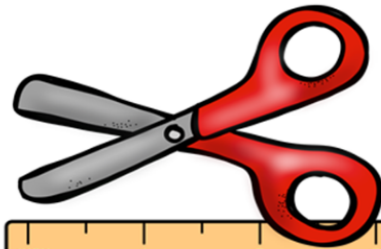
- Audio
- Self Grading
- Teacher Data



MEASURING LENGTH

24

🔊 Measure the object to the nearest inch.
Then, measure it to the nearest centimeter.



inches long

centimeters long

Overview



First



Previous



Skip



Give up



Submit