

2.MD.A.3

# ESTIMATE LENGTHS


TASK CARDS

## ANSWER SHEET

Name: \_\_\_\_\_ Date: \_\_\_\_\_

Card#	Answer
1.	
2.	
3.	
4.	
5.	
6.	
7.	


13 ESTIMATE LENGTHS  
A paper clip measures about 1 inch. Use the paper clip as a benchmark to estimate how much the object measures.



= 4 paper clips

The cookie is about \_\_\_\_\_ in long.


14 ESTIMATE LENGTHS  
A paper clip measures about 1 inch. Use the paper clip as a benchmark to estimate how much the object measures.



= 6 paper clips

The hand is about \_\_\_\_\_ in long.

ESTIMATE LENGTHS  
A small paper clip measures about \_\_\_\_\_



15 ESTIMATE LENGTHS  
A paper clip measures about 1 inch. Use the paper clip as a benchmark to estimate how much the object measures.

16 ESTIMATE LENGTHS  
A paper clip measures about 1 inch. Use the paper clip as a benchmark to estimate how much the object measures.

3 ESTIMATE LENGTHS  
What is your estimate of the length of a TV?

a. 3 in      b. 3 feet

★★★★★☆☆☆☆

🔊 What would measure about 9 inches?

- An eraser
- An egg
- A shoe

## Estimate Lengths



PRINTABLE AND DIGITAL

Mag CORE

- 30 PRINT-AND-GO TASK CARDS
- READY TO USE FOR CENTERS

**ANSWER SHEET**


Name: \_\_\_\_\_ Date: \_\_\_\_\_

Card#	Answer	Card#	Answer
1.		16.	
2.		17.	
3.		18.	
		19.	
		20.	
		21.	
		22.	
		23.	
		24.	



**5 ESTIMATE LENGTHS**


What is your estimate of the length of a paper clip?



a. 1 in    b. 1 m    c. 1 yard

**6 ESTIMATE LENGTHS**


What is your estimate of the length of a girl?



a. 45 cm    b. 45 in    c. 45 feet

**7 ESTIMATE LENGTHS**


What is your estimate of the length of a popsicle?



a. 8 cm    b. 8 feet    c. 8 in

**8 ESTIMATE LENGTHS**

What is your estimate of the length of a car?



a. 15 cm    b. 15 in    c. 15 feet

**21 ESTIMATE LENGTHS**

The tip of your finger is about 1 cm long. Use the tip of a finger as a benchmark to estimate how much the object measures.




= 1 finger tip

The tack is about \_\_\_\_\_ cm long.

**22 ESTIMATE LENGTHS**

The tip of your finger is about 1 cm long. Use the tip of a finger as a benchmark to estimate how much the object measures.




= 12 finger tip

The tack is about \_\_\_\_\_ cm

**23 ESTIMATE LENGTHS**

The tip of your finger is about 1 cm long. Use the tip of a finger as a benchmark to estimate how much the object measures.



**24 ESTIMATE LENGTHS**

The tip of your finger is about 1 cm long. Use the tip of a finger as a benchmark to estimate how much the object measures.



**Ways to Use Task Cards**

- 1 Centers
- 2 Scoot: Pass out one card for each student. Set a timer and say, "scoot!" when the timer goes off. Students move seats to the next card. They continue to rotate until they are back at their original seat.
- 3 Scavenger Hunt: Hide cards around the room. Students search for cards and answer them.
- 4 Jenga: Number Jenga blocks. Students stack the blocks, then take turns pulling blocks. Students answer the corresponding number card.
- 5 Whole class practice: Teacher displays card on the projector. Students answer on mini white boards.
- 6 Exit Tickets: Give each student a task card at the end of the lesson. Have them answer on a sticky note.



# SELF CORRECTING, INCLUDES REPORTING CERTIFICATE

25 ESTIMATE LENGTHS

The tip of your finger measures about


1 cm  1 inch  1 foot

1 ESTIMATE LENGTHS

What is your estimate of the length of a pencil?

2 ESTIMATE LENGTHS


What is your estimate of the length of a ladybug?



2 feet  b. 2 yards  c. 2 cm

27 ESTIMATE LENGTHS

A small paper measures about



1 inch  1 foot  1 yard


INCORRECT

The correct answer is 3 feet.

3 in  3 feet  3 yards

ESTIMATE LENGTHS

What is your estimate of the length of a crayon?



8 in  b. 8 cm  c. 8 m

SHUFFLES CARDS, SO STUDENTS CAN PRACTICE MORE THAN ONCE

13 ESTIMATE LENGTHS  
A paper clip measures about 1 inch. Use the paper clip as a benchmark to estimate how much the object measures.


14 ESTIMATE LENGTHS  
A paper clip measures about 1 inch. Use the paper clip as a benchmark to estimate how much the object measures.

ANSWER SHEET

Name: \_\_\_\_\_

Card#	Answer	Card#
1.		
2.		
3.		
4.		

What is your estimate of the length of a TV?




3 in      3 feet      3 yards

Progress: 6 stars (4 green, 2 grey)

ESTIMATE LENGTHS

What is your estimate of the length of a girl?



inch      1 foot

ESTIMATE LENGTH CHALLENGE

How many paper clips you need to measure 1 \_\_\_\_\_

15.



# STANDARDS ALIGNED

11 ESTIMATE LENGTHS

What would measure about 5 feet?


A. An adult

B. A baby

C. A horse

3 ESTIMATE LENGTHS


What is your estimate of the length of a TV?



a. 3 in      b. 3 feet      c. 3 yards

30 ESTIMATE LENGTHS


The distance between your outstretched arms is about



1 cm      1 meter      1 foot


20 ESTIMATE LENGTHS

The tip of your finger is about 1 cm long. Use the tip of a finger as a benchmark to estimate how much the object measures.




**= 10 finger tips**

The glue is about \_\_\_\_\_ cm long.

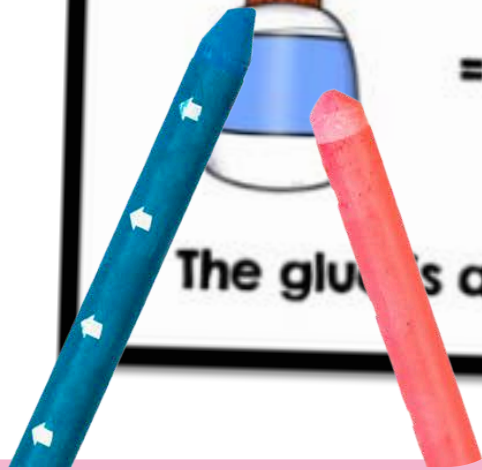



6 ESTIMATE LENGTHS


What is your estimate length?



a. 45 cm      b. 4



# USE OVER AND OVER FOR CENTERS, GAMES, AND REVIEW




**ANSWER SHEET**

Name: \_\_\_\_\_ Date: \_\_\_\_\_

Card#	Answer	Card#
16.		16.
17.		17.
18.		18.
19.		19.
20.		20.
21.		21.
22.		22.
23.		23.
24.		24.
25.		25.
26.		26.
27.		27.
28.		28.
29.		29.
30.		30.

**ESTIMATE LENGTHS**

17 A paper clip measures about 1 inch. Use the paper clip as a benchmark to estimate how much the object measures.




**= 10 paper clips**

The paper is about \_\_\_\_\_ in long.

**ESTIMATE LENGTHS**

18 A paper clip measures about 1 inch. Use the paper clip as a benchmark to estimate how much the object measures.





**= 12 paper clips**

The book is about \_\_\_\_\_ in long.

**ESTIMATE LENGTHS**

19 The tip of your finger is about 1 cm long. Use the tip of a finger as a benchmark to estimate how much the object measures.




**= 4 finger tips**

The eraser is about \_\_\_\_\_ cm long.

**ESTIMATE LENGTHS**

20 The tip of your finger is about 1 cm long. Use the tip of a finger as a benchmark to estimate how much the object measures.



**= 10 finger tips**

The glue is about \_\_\_\_\_ cm long.

**ESTIMATE LENGTHS**

9 What would measure about 9 inches?

**ESTIMATE LENGTHS**

10 What would measure about 9 centimeters?

A. A phone  
B. An egg  
C. A dog

**ESTIMATE LENGTHS**




12 What would measure about 2 inches?

A. A finger  
B. A hand  
C. A leg

**ESTIMATE LENGTHS**

What would measure about 1 foot?

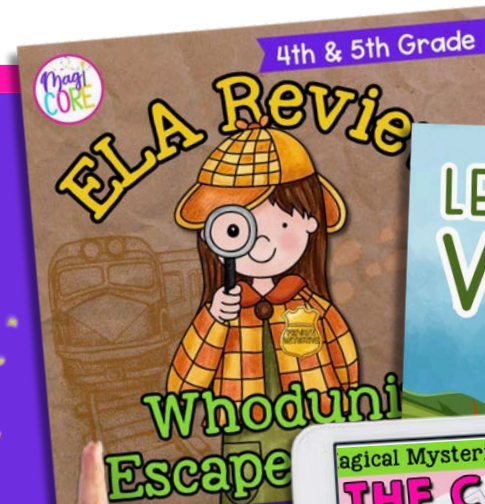
A. An adult  
B. A baby  
C. A horse



A digital platform that empowers teachers and parents to transform learning through virtual exploration.

## WHAT'S INSIDE?

Unlimited access to over 1,000 digital interactive resources for a variety of subjects, topics, and seasons.



START YOUR 10 DAY FREE TRIAL!



# MAGICCOREACADEMY.COM

