

2.MD.A.4

COMPARE LENGTHS

TASK CARDS

ANSWER SHEET

Name: _____ Date: _____

Card#	Answer	Ca
1.		
2.		
3.		
4.		
5.		
6.		
7.		

5 MEASURE HOW MUCH LONGER
How much longer is the pencil than the crayon?

4 in 5 in

6 MEASURE HOW MUCH LONGER
How much longer is the pencil than the tack?

5 in 6 in

7 MEASURE HOW MUCH LONGER
How much longer is the crayon than the tack?

2 in 1 in

8 MEASURE HOW MUCH LONGER
How much longer is the pen than the pencil?

5 in 4 in

26 MEASURE HOW MUCH LONGER
Maddie's ice cream cone is 9 in tall. She put one more scoop, and it is 10 in tall. How many in taller is the ice cream cone now?

18 MEASURE HOW MUCH LONGER
How much longer is the pen than the paperclip?

5 in 1 in

How much longer is the pen than the pencil?

0 in 1 in

Compare Lengths



Melody's flower was 1 foot tall in the spring. It grew 12 inches over the summer. How tall is it now? Write your answer.

Mag CORE

PRINTABLE AND DIGITAL

- 30 PRINT-AND-GO TASK CARDS
- READY TO USE FOR CENTERS

ANSWER SHEET

Name: _____ Date: _____

Card#	Answer	Card#	Answer
1.		16.	
2.		17.	
3.		18.	
		19.	
		20.	
		21.	
		22.	
		23.	
		24.	
		25.	



1 MEASURE HOW MUCH LONGER

How much longer is the orange line than the blue line?

4 in 7 in

2 MEASURE HOW MUCH LONGER

How much longer is the orange line than the blue line?

5 in 1 in

3 MEASURE HOW MUCH LONGER

How much longer is the orange line than the blue line?

8 in 7 in

4 MEASURE HOW MUCH LONGER

How much longer is the orange line than the blue line?

2 in 3 in

13 MEASURE HOW MUCH LONGER

The _____ is 3 in longer than the eraser.

8 in 3 in 6 in

scissors crayon

14 MEASURE HOW MUCH LONGER

The _____ is 2 in longer than the crayon.

8 in 3 in 6 in

scissors eraser

15 MEASURE HOW MUCH LONGER

The _____ is 3 in longer than the ladybug.

16 MEASURE HOW MUCH LONGER

The _____ is 0 in longer than the _____.

4 in

cookie



Ways to Use Task Cards

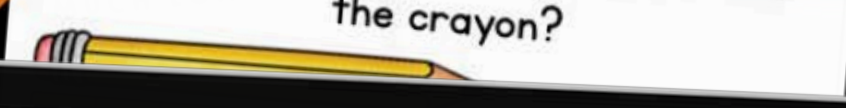
- Centers**
- Scoot:** Pass out one card for each student. Set a timer and say, "scoot!" when the timer goes off. Students move seats to the next card. They continue to rotate until they are back at their original seat.
- Scavenger Hunt:** Hide cards around the room. Students search for cards and answer them.
- Jenga:** Number Jenga blocks. Students stack the blocks, then take turns pulling blocks. Students answer the corresponding number card.
- Whole class practice:** Teacher displays card on the projector. Students answer on mini white boards.
- Exit Tickets:** Give each student a task card at the end of the lesson. Have them answer on a sticky note.




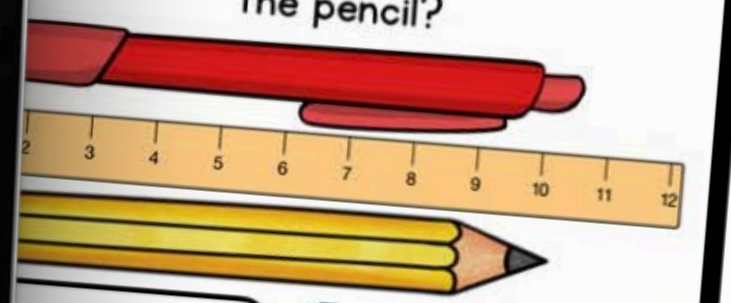
SELF CORRECTING, INCLUDES REPORTING CERTIFICATE

21 MEASURE HOW MUCH LONGER
Michaela's train is 7 in long
Jonathan's train is 10 in long
How much longer is Jonathan's train than Michaela's?

23 MEASURE HOW MUCH LONGER
Zoe's sunflower was 2 in tall in May. It grew over the summer, and now it is 3 in tall. How many inches did the sunflower grow?

5 MEASURE HOW MUCH LONGER
How much longer is the pencil than the crayon?


6 MEASURE HOW MUCH LONGER
How much longer is the pencil than the tack?

5 in 6 in

MEASURE HOW MUCH LONGER
How much longer is the pen than the pencil?

0 in 1 in

INCORRECT
The correct answer is 0 in.
CONTINUE
0 in 1 in



SHUFFLES CARDS, SO STUDENTS CAN PRACTICE MORE THAN ONCE




ANSWER SHEET

Name: _____

Card#	Answer	Ca
1.		
2.		
3.		
4.		



 Maddie's ice cream cone is 9 in tall. She put one more scoop, and it is now 14 in tall. How many in taller is the ice cream cone now?

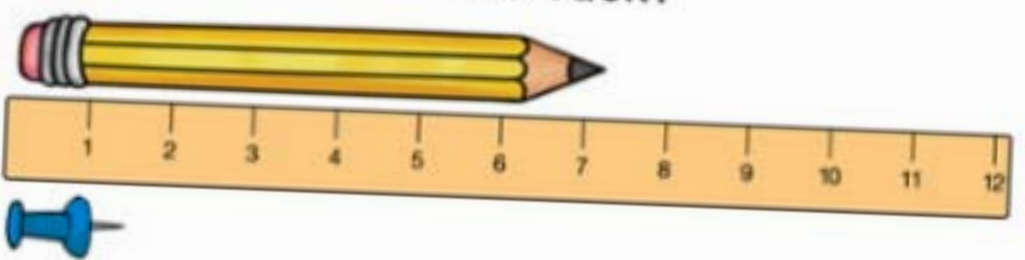
MEASURE HOW MUCH CHALLENGE

Melody's flower was 1 foot tall. It grew 15 inches over the summer. How tall is it now? Write your answer in _____

STANDARDS ALIGNED

6 MEASURE HOW MUCH LONGER

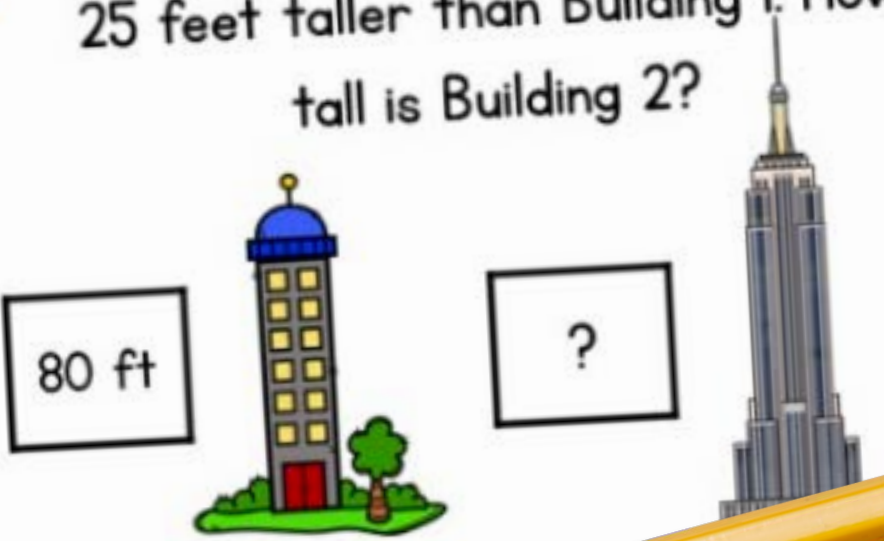
How much longer is the pencil than the tack?



5 in 6 in

29 MEASURE HOW MUCH LONGER


Building #1 is 80 ft tall. Building #2 is 25 feet taller than Building 1. How tall is Building 2?



80 ft ?

18 MEASURE HOW MUCH LONGER

How much longer is the pen than the paperclip?




5 in 1 in

5 in 4 in

15 MEASURE HOW MUCH LONGER

The _____ is 3 in longer than the ladybug.




1 in 1 in 4 in

paperclip cookie

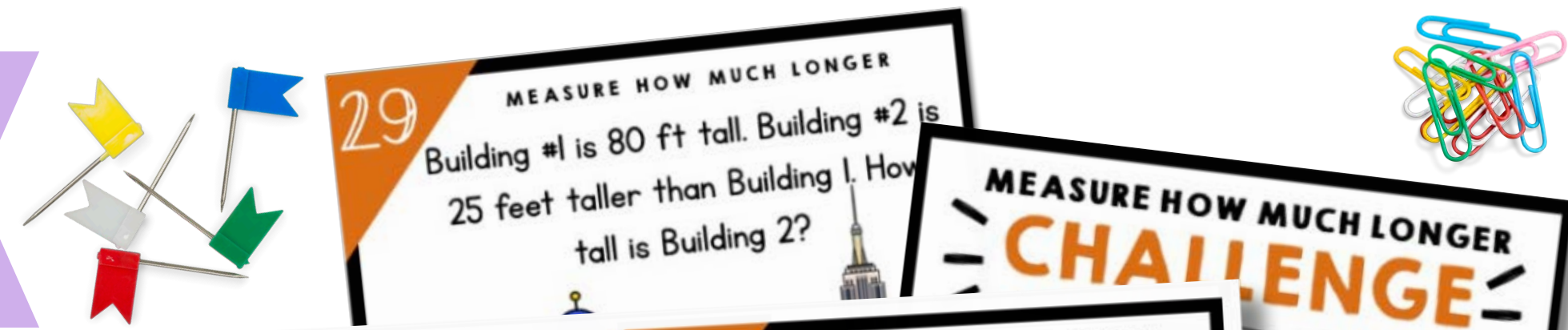
26 MEASURE HOW MUCH LONGER

Maddie's ice cream cone is 9 in tall. She put one more scoop, and it is now 12 in tall. How many inches taller is the ice cream cone now?



9 in 12 in

USE OVER AND OVER FOR CENTERS, GAMES, AND REVIEW



ANSWER SHEET

Name: _____ Date: _____

Card#	Answer	Card#
16.		
17.		
18.		
19.		
20.		
21.		
22.		

13 MEASURE HOW MUCH LONGER

The _____ is 3 in longer than the eraser.

8 in 3 in 6 in

scissors **crayon**

14 MEASURE HOW MUCH LONGER

The _____ is 2 in longer than the crayon.

8 in 3 in 6 in

scissors **eraser**

15 MEASURE HOW MUCH LONGER

The _____ is 3 in longer than the ladybug.

1 in 1 in 4 in

paperclip **cookie**

16 MEASURE HOW MUCH LONGER

The _____ is 0 in longer than the ladybug.

1 in 1 in

paperclip **cookie**

3 MEASURE HOW MUCH LONGER

How much longer is the pencil than the paperclip?

5 in

5 in

5 MEASURE HOW MUCH LONGER

How much longer is the pencil than the crayon?

5 in

6 MEASURE HOW MUCH LONGER

How much longer is the pencil than the tack?

5 in **6 in**

8 MEASURE HOW MUCH LONGER

How much longer is the pen than the pencil?

0 in **1 in**

29 MEASURE HOW MUCH LONGER

Building #1 is 80 ft tall. Building #2 is 25 feet taller than Building 1. How tall is Building 2?

MEASURE HOW MUCH LONGER CHALLENGE

_____ foot tall. It grew 6 in. How tall it is now? Answer in inches.

MEASURE HOW MUCH LONGER

_____ ice cream cone is 9 in tall. It grew 5 in. How tall is it now? Answer in inches.

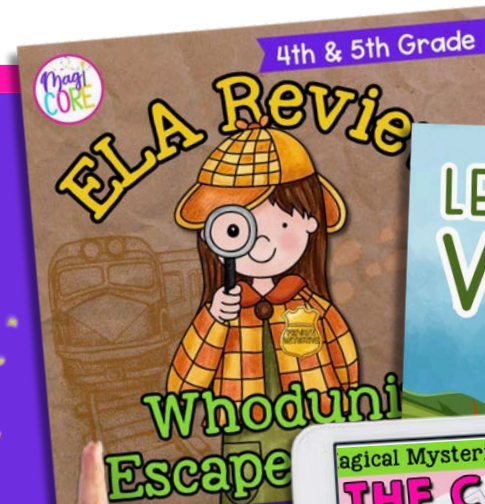
How many in taller is the ice cream cone now?



A digital platform that empowers teachers and parents to transform learning through virtual exploration.

WHAT'S INSIDE?

Unlimited access to over 1,000 digital interactive resources for a variety of subjects, topics, and seasons.



START YOUR 10 DAY FREE TRIAL!



MAGICCOREACADEMY.COM

