

3.MBT.A.2

ADD & SUBTRACT WITHIN 10000

TASK CARDS



ANSWER SHEET

Name: _____ Date: _____

Card#	Answer	Card#	Answer
1.			
2.			
3.			
4.			
5.			
6.			
7.			

9 ADD & SUBTRACT
Find the difference.

6	2	5
-	3	1

10 ADD & SUBTRACT
Find the difference.

9	8	7
-	1	0

ADD & SUBTRACT
Add.

641 +



ADD & SUBTRACT
CHALLENGE

Melanie had \$956 and she used some money to buy a bike. She now has \$796 left. How much did the bike cost?

ADD & SUBTRACT
WITHIN 1,000

2+3=5

12 ADD & SUBTRACT
Solve.

There are 134 second graders and 193 third graders attending Shire. How many second and third graders are there in all?

BONUS QUESTION ★

Melanie had \$956 and she used some money to buy a bike. She now has \$796 left. How much did the bike cost?



PRINTABLE AND DIGITAL

- 30 PRINT-AND-GO TASK CARDS
- READY TO USE FOR CENTERS

ANSWER SHEET

Name: _____ Date: _____

Card#	Answer	Card#	Answer
1.		16.	
2.		17.	
3.		18.	
		19.	
		20.	
		21.	
		22.	
		23.	
		24.	



13 ADD & SUBTRACT

Find the difference. Use scratch paper if needed.

6	8	5
-	1	0 3

Did you regroup?

Yes

No

14 ADD & SUBTRACT

Find the difference. Use scratch paper if needed.

9	2	2
-	8	6

Did you regroup?

Yes

No

15 ADD & SUBTRACT

Find the difference. Use scratch paper if needed.

1	8	2
-	1	0 9

Did you regroup?

Yes

No

16 ADD & SUBTRACT

Find the difference. Use scratch paper if needed.

7	0	2
-	5	9 6

Did you regroup?

Yes

No

© Julie Boches

1 ADD & SUBTRACT

Find the sum.

5	2	5
+	1	3 4

2 ADD & SUBTRACT

Find the sum.

	9	3
+	2	0 5

3 ADD & SUBTRACT

Find the sum.

1	1	1
+	1	1 1

4 ADD & SUBTRACT

Find the sum.

1	1	1
+	1	1 1

ADD & SUBTRACT WITHIN 1,000

Ways to Use Task Cards

- Centers
- Scout: Pass out one card for each student. Set a timer and say, "scout!" when the timer goes off. Students move seats to the next card. They continue to rotate until they are back at their original seat.
- Scavenger Hunt: Hide cards around the room. Students search for cards and answer them.
- Jenga: Number Jenga blocks. Students stack the blocks, then take turns pulling blocks. Students answer the corresponding number card.
- Whole class practice: Teacher displays card on the projector. Students answer on mini white boards.
- Exit Tickets: Give each student a task card at the end of the lesson. Have them answer on a sticky note.



SELF CORRECTING, INCLUDES REPORTING CERTIFICATE

5 ADD & SUBTRACT

Find the sum. Use scratch paper if needed.

2	6	9
+	8	3

Did you regroup?

Yes

No



INCORRECT

The correct answer is 728 carrots.

CONTINUE

21 ADD & SUBTRACT


Solve.

There is a bag with 265 jelly beans.

22 ADD & SUBTRACT

Solve.


Of the 637 people at the concert, 372 are girls. How many of them are boys?



ADD & SUBTRACT

Solve.

Gavin has \$560 saved up. He bought video games that cost \$97. How much money does Gavin have left?



STANDARDS ALIGNED

19

ADD & SUBTRACT

Solve.

There are 134 second graders and 219 third graders attending Shire Elementary. How many second and third graders are there in all?



7

ADD & SUBTRACT

Find the sum. Use scratch paper if needed.

	5	1	9
+	2	2	0

Did you regroup?

Yes

No

12

ADD & SUBTRACT

Find the difference.

	7	7	6
-	6	1	5

15

ADD & SUBTRACT

Find the difference. Use scratch paper if needed.

	1	8	2
-	1	0	9

Did you regroup?

Yes



No

1

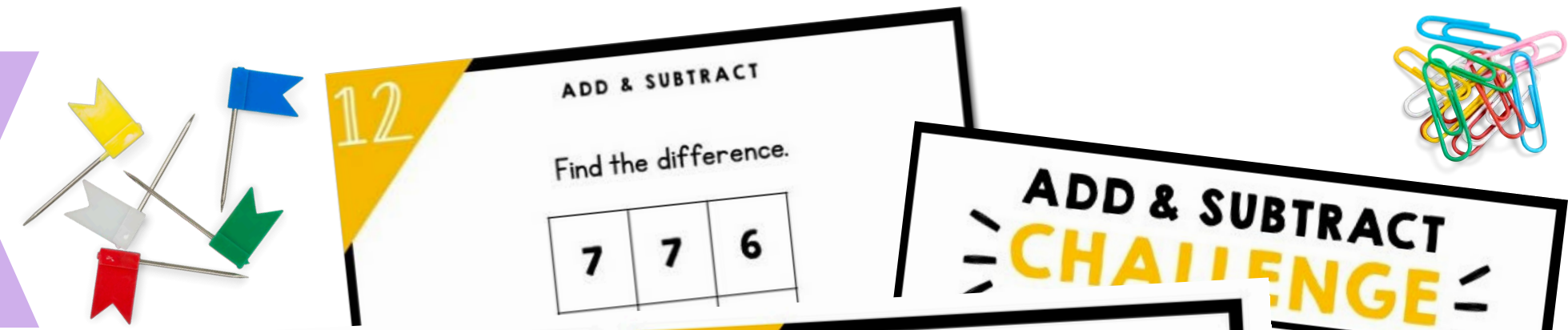
ADD & SUBTRACT

Find the sum.

	5	2	5
+	1	3	



USE OVER AND OVER FOR CENTERS, GAMES, AND REVIEW



ANSWER SHEET

Name: _____ Date: _____

Card#	Answer	Card#
		16.
		17.
3.		18.
4.		19.
5.		20.
6.		
7.		
8.		

13 ADD & SUBTRACT

Find the difference. Use scratch paper if needed.

6	8	5
-	1	0

Did you regroup?

Yes

No

14 ADD & SUBTRACT

Find the difference. Use scratch paper if needed.

9	2	2
-		8
		6

Did you regroup?

Yes

No

15 ADD & SUBTRACT

Find the difference. Use scratch paper if needed.

1	8	2
-	1	0
		9

Did you regroup?

Yes

No

16 ADD & SUBTRACT

Find the difference. Use scratch paper if needed.

7	0	2
-	5	9
		6

Did you regroup?

No



12 ADD & SUBTRACT

Find the difference.

7	7	6
---	---	---

10 ADD & SUBTRACT

Find the difference.

9	8	7
-	1	0
		6

12 ADD & SUBTRACT

Find the difference.

7	7	6
-	6	1
		5

ADD & SUBTRACT CHALLENGE

She used some money now has \$796. How much did the bike cost?

--	--	--

RACT

m.

+	1	3
		4



A digital platform that empowers teachers and parents to transform learning through virtual exploration.

WHAT'S INSIDE?

Unlimited access to over 1,000 digital interactive resources for a variety of subjects, topics, and seasons.



START
YOUR 10
DAY FREE
TRIAL!



MAGICCOREACADEMY.COM