

3.NF.A.3.C

3.NF.A.3.D

EXPRESS WHOLE NUMBERS AS FRACTIONS and COMPARE TWO FRACTIONS WITH THE SAME NUMERATOR NUMERATOR/DENOMINATOR

TASK CARDS



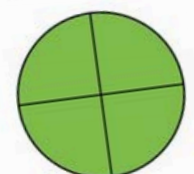
ANSWER SHEET

Name: _____ Date: _____

Card #	Answer	Cal
1.		
2.		
3.		1
4.		2
5.		2
6.		2
7.		2

1 EXPRESS & COMPARE FRACTIONS

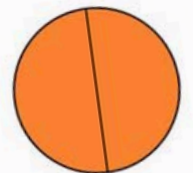
Look at the picture and choose the correct fraction that represents it.



A. $\frac{4}{4}$
B. $\frac{1}{4}$

2 EXPRESS & COMPARE FRACTIONS

Look at the picture and choose the correct fraction that represents it.



A. $\frac{1}{2}$
B. $\frac{2}{2}$

3 EXPRESS & COMPARE FRACTIONS

Look at the picture and choose the correct fraction that represents it.

4 EXPRESS & COMPARE FRACTIONS

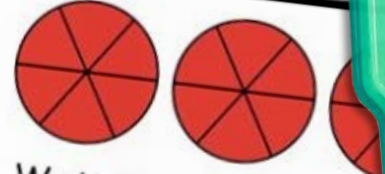
Look at the picture and choose the correct fraction that represents it.

EXPRESS & COMPARE FRACTIONS

Is the comparison correct?

$$\frac{6}{6} =$$

FRACTIONS CHALLENGE



Write the equivalent fraction

$$3 = \frac{\quad}{\quad}$$

EXPRESS & COMPARE FRACTIONS

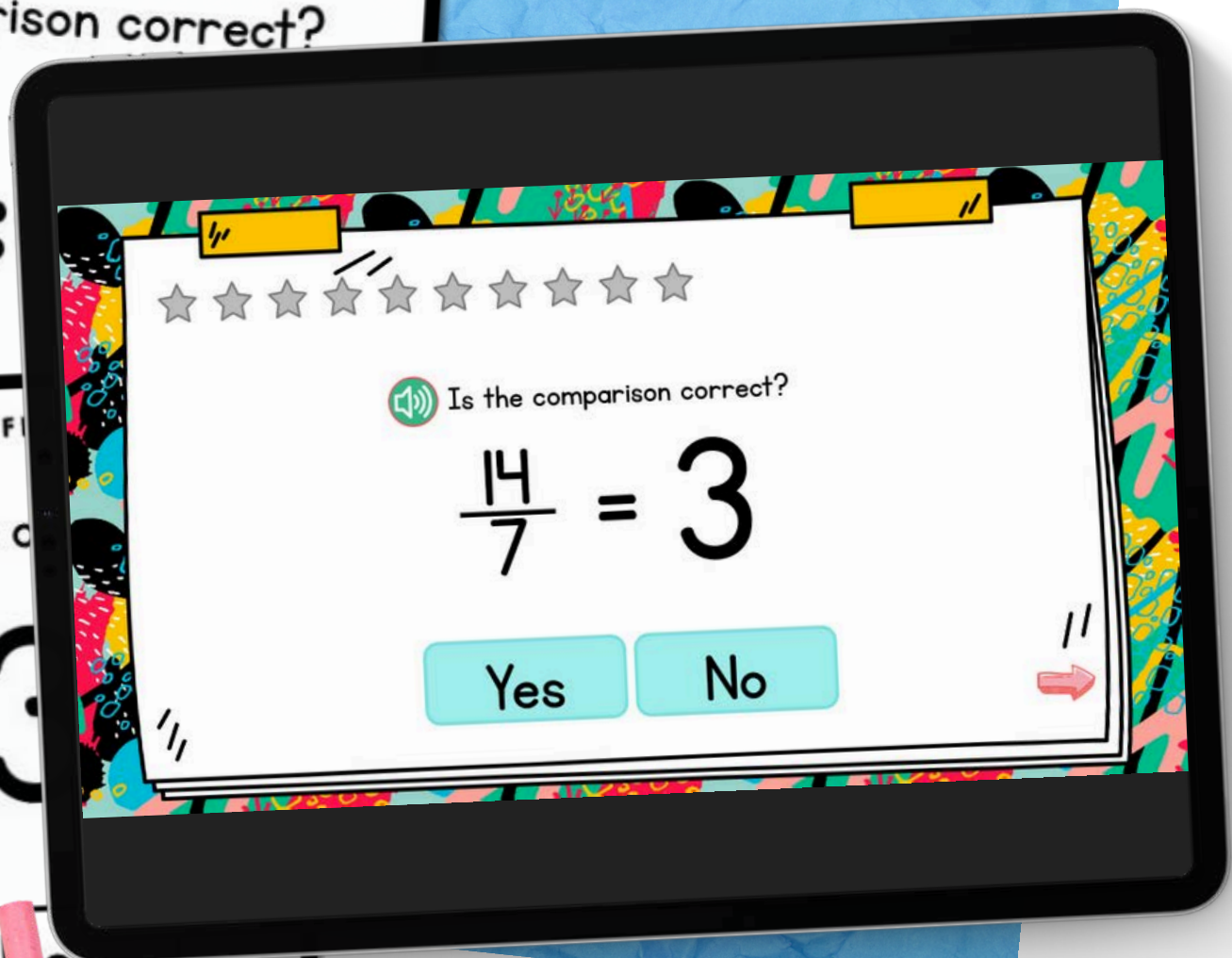


30 EXPRESS & COMPARE FRACTIONS

Is the comparison correct?

$$\frac{14}{7} = 3$$

Yes No



Is the comparison correct?

$$\frac{14}{7} = 3$$

Yes No



PRINTABLE AND DIGITAL

- 30 PRINT-AND-GO TASK CARDS
- READY TO USE FOR CENTERS

ANSWER SHEET

Name: _____ Date: _____

Card#	Answer	Card#	Answer
1.		16.	
2.		17.	
3.		18.	
		19.	
		20.	
		21.	
		22.	
		23.	
		24.	



21 EXPRESS & COMPARE FRACTIONS

Choose the fraction that is bigger.

A.

B.

23 EXPRESS & COMPARE FRACTIONS

Choose the fraction that is bigger.

A.

$$\frac{8}{4}$$

B.

$$\frac{8}{2}$$

22 EXPRESS & COMPARE FRACTIONS

Choose the fraction that is bigger.

A.

B.

24 EXPRESS & COMPARE FRACTIONS

Choose the fraction that is bigger.

A.

$$\frac{3}{3}$$

B.

$$\frac{6}{3}$$

9 EXPRESS & COMPARE FRACTIONS

Look at the fraction and choose the correct picture that represents it.

$$\frac{1}{1}$$

A.

B.

10 EXPRESS & COMPARE FRACTIONS

Look at the fraction and choose the correct picture that represents it.

$$\frac{2}{1}$$

A.

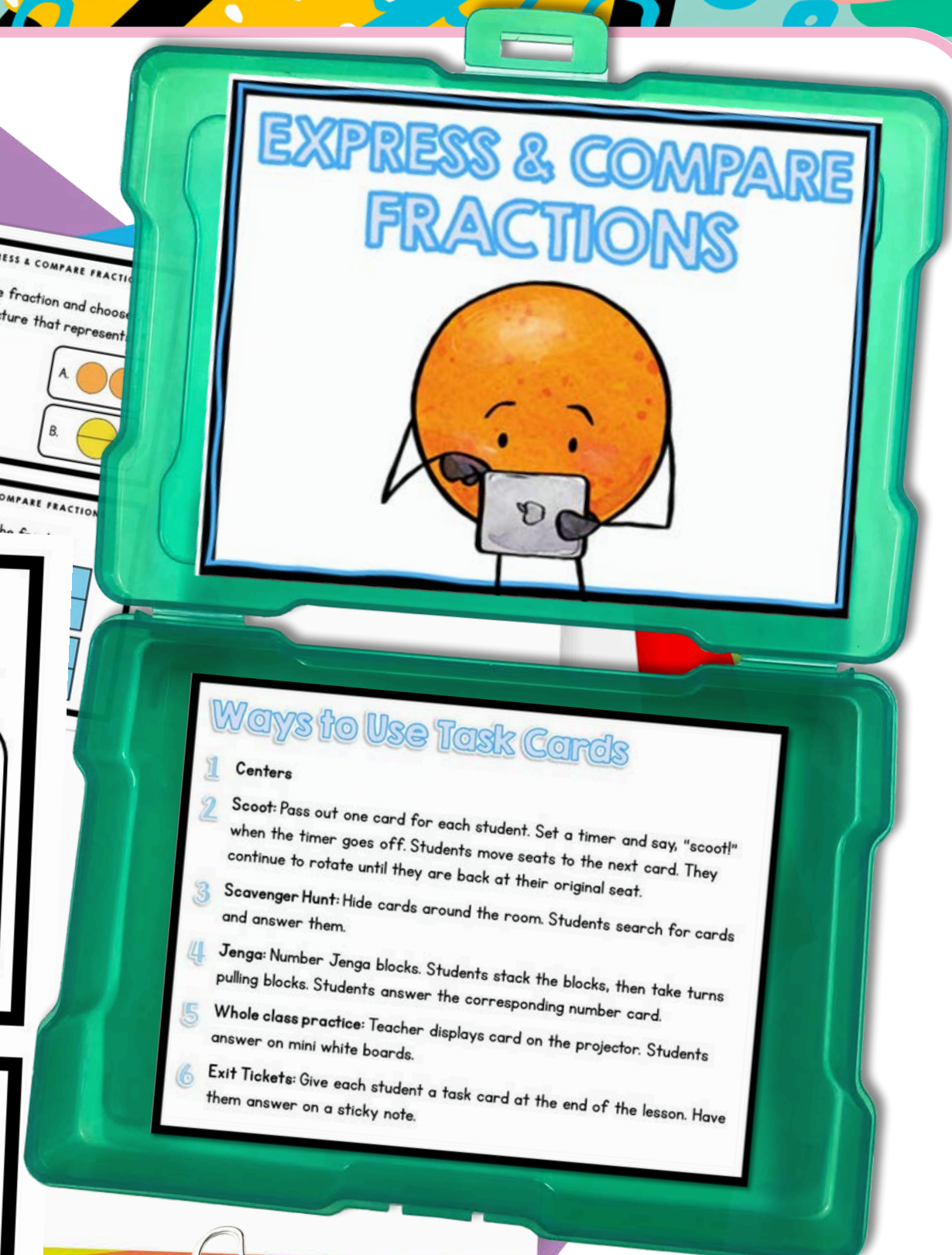
B.

11 EXPRESS & COMPARE FRACTIONS

Write the fraction.

12 EXPRESS & COMPARE FRACTIONS

Write the fraction.




© Julie Bochesse

SELF CORRECTING, INCLUDES REPORTING CERTIFICATE

5 EXPRESS & COMPARE FRACTIONS

Look at the picture and choose correct fraction that represent



A. $\frac{3}{5}$

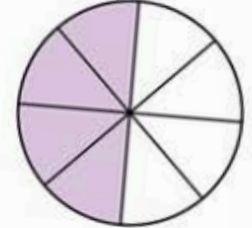

B. $\frac{4}{5}$

17 EXPRESS & COMPARE FRACTIONS

Compare the fractions.

18 EXPRESS & COMPARE FRACTIONS


Compare the fractions.




< >

7 EXPRESS & COMPARE FRACTIONS

Look at the fraction and choose correct picture that represent

A. 

B. 

< >

INCORRECT

The correct answer is $\frac{4}{5}$.

CONTINUE

EXPRESS & COMPARE FRACTIONS

Compare the fractions.

$$\frac{4}{5} \quad \frac{1}{5}$$

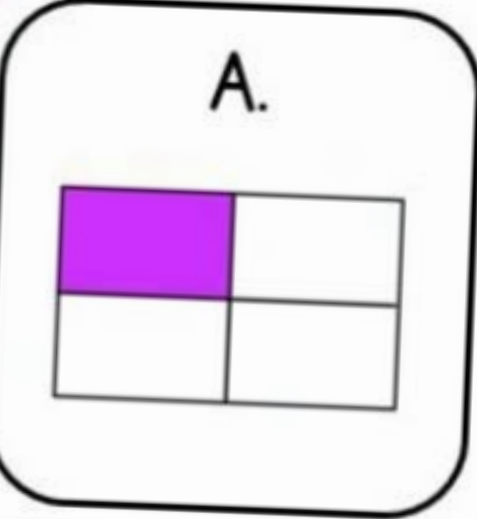
< >

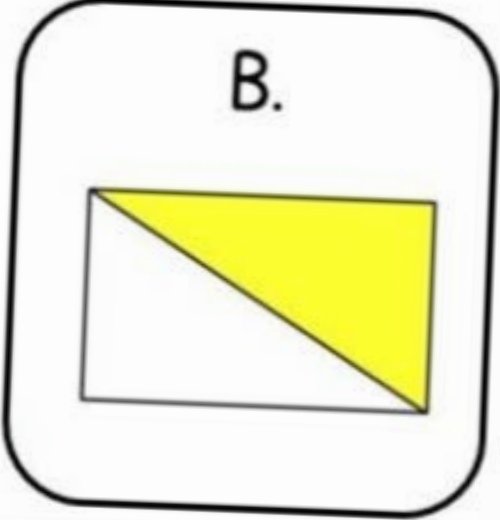


STANDARDS ALIGNED

22 EXPRESS & COMPARE FRACTIONS

Choose the fraction that is bigger.

A. 

B. 

29 EXPRESS & COMPARE FRACTIONS

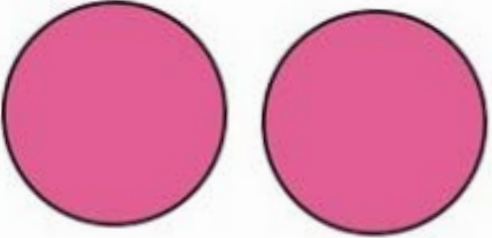
Is the comparison correct?

$$\frac{6}{6} = \frac{14}{14}$$

Yes No

3 EXPRESS & COMPARE FRACTIONS

Look at the picture and choose the correct fraction that represents it.

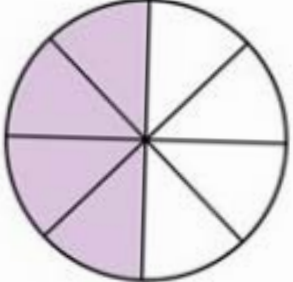



A. $\frac{1}{2}$

B. $\frac{2}{1}$

18 EXPRESS & COMPARE FRACTIONS



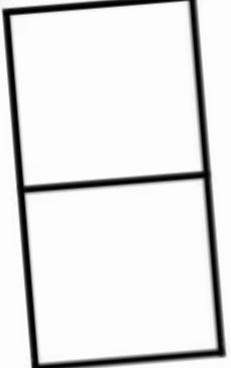
Compare the fractions.



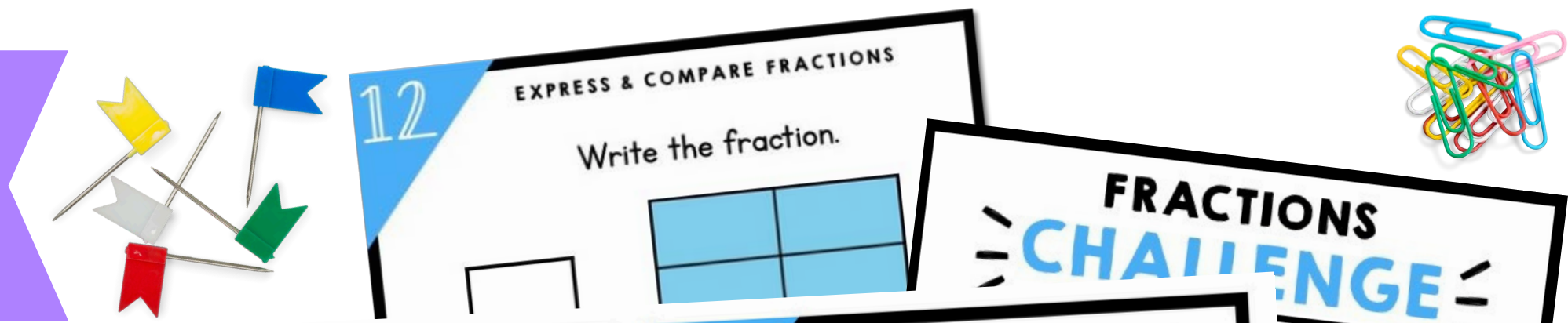
< >

12 EXPRESS & COMPARE FRACTIONS

Write the fraction.



USE OVER AND OVER FOR CENTERS, GAMES, AND REVIEW



ANSWER SHEET

Name: _____ Date: _____

Card#	Answer	Card#
16.		
17.		
18.		
19.		
20.		
21.		
22.		
23.		
24.		

1 EXPRESS & COMPARE FRACTIONS

Look at the picture and choose the correct fraction that represents it.

A. $\frac{4}{4}$
B. $\frac{1}{4}$

2 EXPRESS & COMPARE FRACTIONS

Look at the picture and choose the correct fraction that represents it.

A. $\frac{1}{2}$
B. $\frac{2}{2}$

3 EXPRESS & COMPARE FRACTIONS

Look at the picture and choose the correct fraction that represents it.

A. $\frac{1}{2}$
B. $\frac{2}{1}$

4 EXPRESS & COMPARE FRACTIONS

Look at the picture and choose the correct fraction that represents it.

B. $\frac{3}{3}$

12 EXPRESS & COMPARE FRACTIONS

Write the fraction.

17 EXPRESS & COMPARE FRACTIONS

Compare the fractions.

18 EXPRESS & COMPARE FRACTIONS

Compare the fractions.

< >

20 EXPRESS & COMPARE FRACTIONS

Compare the fractions.

$\frac{4}{5}$ $\frac{1}{5}$

< >

EXPRESS & COMPARE FRACTIONS

Which fraction is bigger.

A.

B.



A digital platform that empowers teachers and parents to transform learning through virtual exploration.

WHAT'S INSIDE?

Unlimited access to over 1,000 digital interactive resources for a variety of subjects, topics, and seasons.



START
YOUR 10
DAY FREE
TRIAL!



MAGICCOREACADEMY.COM