

3.MD.A.1

TELL AND WRITE TIME TO THE NEAREST MINUTE

TASK CARDS

ANSWER SHEET

Name: _____ Date: _____

Card #	Answer	Cal
1.		
2.		
3.		
4.		
5.		
6.		
7.		

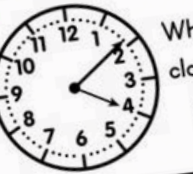
9 TELL AND WRITE TIME



What time does the clock show if it is in the afternoon?

: : AM PM

10 TELL AND WRITE TIME




What time does the clock show if it is in the afternoon?

: : AM PM




11 TELL AND WRITE TIME



What time does the clock show if it is in the afternoon?

: : AM PM

12 TELL AND WRITE TIME



What time does the clock show if it is in the afternoon?

: : AM PM

20 TELL AND WRITE TIME

Use the number line to help you solve the problem.


Michael played in the backyard from 12:00pm to 12:35pm. How much time did he spend outside?

Michael spent _____ minute

★ ★ ★ ★ ★ ★ ★ ★ ★ ★

Read the problem. Then, determine if the clock is showing the start time or the end time.

Lunch time started at 12:15 pm. Maxine finished her lunch at 12:32 pm.



Start Time End Time



TELL AND WRITE TIME TO THE NEAREST MINUTE



PRINTABLE AND DIGITAL

- 30 PRINT-AND-GO TASK CARDS
- READY TO USE FOR CENTERS

ANSWER SHEET

Name: _____ Date: _____

Card#	Answer	Card#	Answer
1.		16.	
2.		17.	
3.		18.	
		19.	
		20.	
		21.	
		22.	
		23.	
		24.	
		25.	
		26.	
		27.	
		28.	
		29.	
		30.	



17 TELL AND WRITE TIME

Use the number line to help you solve the word problem.

Carmen started playing a video game at 4:10pm. She finished playing at 4:50pm. How long did Carmen play video games?

Carmen played for ___ minutes.

19 TELL AND WRITE TIME

Use the number line to help you solve the word problem.

It takes Cheryl 19 minutes to get ready for bed. If she started getting ready at 7:05pm, at what time will she be ready?

Cheryl will be ready for bed at ____.

18 TELL AND WRITE TIME

Use the number line to help you solve the word problem.

Pete started his homework at 2:37pm. He worked on spelling for 15 minutes. When did Pete finish his homework?

Pete finished his homework at ____.

20 TELL AND WRITE TIME

Use the number line to help you solve the word problem.

Michael played in the backyard from 12:00pm to 12:35pm. How much time did he spend outside?

Michael spent ___ minutes outside.

1 TELL AND WRITE TIME

What time is the clock showing?

12:03 3:01 3:13

2 TELL AND WRITE TIME

What time is the clock showing?

8:04 12:40 8:00

3 TELL AND WRITE TIME

What time is the clock showing?

4 TELL AND WRITE TIME

What time is the clock showing?

TELL AND WRITE TIME TO THE NEAREST MINUTE


Ways to Use Task Cards

- Centers
- Scoot: Pass out one card for each student. Set a timer and say, "scoot!" when the timer goes off. Students move seats to the next card. They continue to rotate until they are back at their original seat.
- Scavenger Hunt: Hide cards around the room. Students search for cards and answer them.
- Jenga: Number Jenga blocks. Students stack the blocks, then take turns pulling blocks. Students answer the corresponding number card.
- Whole class practice: Teacher displays card on the projector. Students answer on mini white boards.
- Exit Tickets: Give each student a task card at the end of the lesson. Have them answer on a sticky note.




SELF CORRECTING, INCLUDES REPORTING CERTIFICATE

9 TELL AND WRITE TIME



What time does the

10 TELL AND WRITE TIME



What time does the clock show if it is in the afternoon?

: AM
PM

13 TELL AND WRITE TIME

Read the problem. Then, determine if the clock is showing the start time or the end time.

Clara wakes up at 6:45 am. She catches the school bus at 7:30 am.

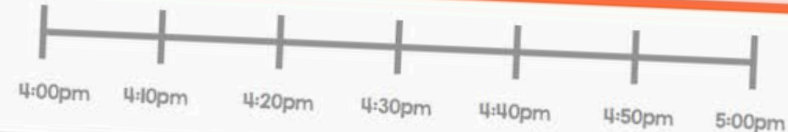


Start Time End Time


INCORRECT

The correct answer is 40 minutes.

CONTINUE



TELL AND WRITE TIME



What time does the clock show if it is in the afternoon?

: AM
PM




SHUFFLES CARDS, SO STUDENTS CAN PRACTICE MORE THAN ONCE

The image features a central tablet displaying a digital worksheet titled "TELL AND WRITE TIME". The tablet screen shows a row of ten stars, a speaker icon, and the question "What time does the clock show if it is in the afternoon?". Below the question is a clock face showing 2:47. To the right of the clock are two empty boxes for the hour and minute, and buttons for "am" and "pm". A red arrow points to the right. The tablet is surrounded by several printed worksheets. One worksheet shows a clock at 3:09 and the question "What time is the clock showing?". Another worksheet shows a clock at 2:47 and the question "What time is the clock showing?". A third worksheet shows a word problem: "Melanie started working at 8:00. He for 3 hours. Melanie says he is at 8:03." Below the word problem are boxes for "Start Time", "Elapsed Time", and "End Time". A blue pencil case with a rainbow of pencils is in the bottom right corner. A blue keyboard is partially visible in the bottom right corner. Paper clips are attached to the top right of the worksheets. The background is a colorful, abstract pattern.

STANDARDS ALIGNED

7

TELL AND WRITE TIME



What time does the clock show if it is in the morning?

_____ : _____


AM PM

16

TELL AND WRITE TIME

Read the problem. Then, determine if the clock is showing the start time or the end time.


Jonathan starts running at 12:24 pm. He finishes his run at 12:53 pm.



Start Time End Time

3

TELL AND WRITE TIME




What time is the clock showing?

2:47 3:09 9:14

5

TELL AND WRITE TIME



What time does the clock show if it is in the morning?

_____ : _____

AM PM



29

TELL AND WRITE TIME


Read the word problem. Determine if the student is correct or incorrect.

Howard started working for 3 hours and finished working for 3 hours.

Correct Incorrect



USE OVER AND OVER FOR CENTERS, GAMES, AND REVIEW



ANSWER SHEET

Name: _____ Date: _____

Card#	Answer	Card#
1.		16.
2.		17.
3.		18.
4.		19.
5.		20.
6.		21.
7.		22.
8.		23.

25 TELL AND WRITE TIME

Use the start time and the end time to determine the elapsed time.

6:37 **6:57**

Start Time Elapsed Time End Time

26 TELL AND WRITE TIME

Use the start time and the end time to determine the elapsed time.

1:16 **1:23**

Start Time Elapsed Time End Time

27 TELL AND WRITE TIME

Use the start time and the end time to determine the elapsed time.

8:48 **8:59**

Start Time Elapsed Time End Time

28 TELL AND WRITE TIME

Use the start time and the end time to determine the elapsed time.

12:59

Start Time Elapsed Time End Time

7 TELL AND WRITE TIME

What time does the clock show if it is in the morning?

10 TELL AND WRITE TIME

What time does the clock show if it is in the afternoon?

: AM
 PM

12 TELL AND WRITE TIME

What time does the clock show if it is in the afternoon?

: AM
 PM

TELL AND WRITE TIME CHALLENGE

Working at 1:00pm. He had weights for 25 minutes. How long was he exercising?

COMPARE FRACTIONS

Which fraction is bigger?

A.

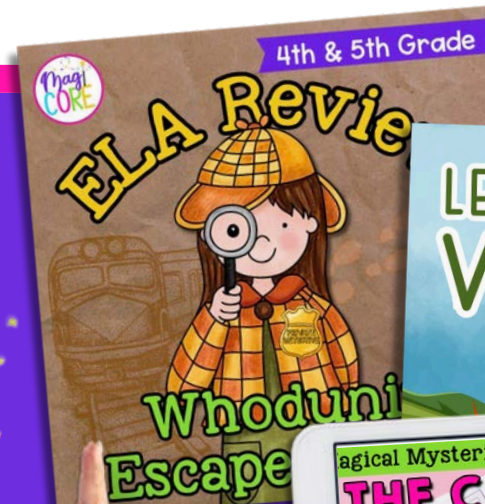
B.



A digital platform that empowers teachers and parents to transform learning through virtual exploration.

WHAT'S INSIDE?

Unlimited access to over 1,000 digital interactive resources for a variety of subjects, topics, and seasons.



START YOUR 10 DAY FREE TRIAL!



MAGICCOREACADEMY.COM

