

Partition Shapes

3rd GRADE

task cards

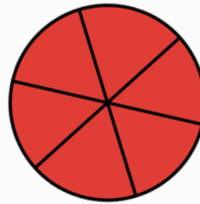
PARTITION SHAPES

3

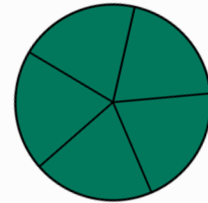
PARTITION SHAPES

Which shape is partitioned into fifths?

A



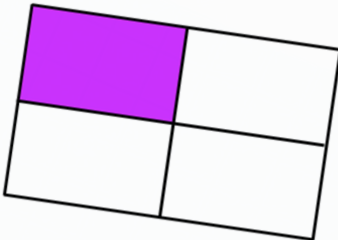
B



10

PARTITION SHAPES

Which fraction is represented by the shape?



$\frac{1}{3}$

$\frac{1}{4}$

$\frac{1}{6}$

25

PARTITION SHAPES

Daniel has a cupcake, and he wants to share it with his cousin. How should he cut his cupcake?

A



B



Print & Digital
(Google & Boom Cards™)

Magi
CORE

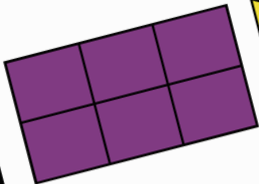
Print

4

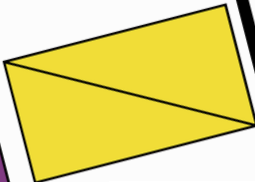
PARTITION SHAPES

Which shape is partitioned into halves?

A



B



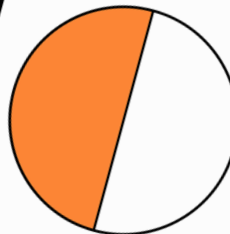
PARTITION SHAPES CHALLENGE

A shape is partitioned in six equal parts. It is partitioned into

13

PARTITION SHAPES

Which fraction is represented by the shape?



$\frac{1}{5}$

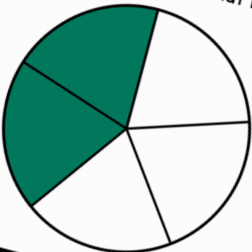
$\frac{1}{6}$

$\frac{1}{2}$

19

PARTITION SHAPES

Write the fraction that is shown on the shape.




26

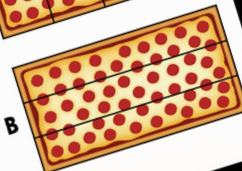
PARTITION SHAPES

Caroline's family is having pizza for dinner. They are 4 people in her family. Which pizza has a slice for each person in her family?

A



B




Google Slides

24

PARTITION SHAPES

Write the fraction that is shown on the shape.



$$\frac{3}{4}$$

Boom Learning

- Audio
- Self Grading
- Teacher Data




Preview

27 PARTITION SHAPES



There are 8 people in Stuart's birthday party. After singing Happy Birthday, Stuart's mom cuts the cake so that everybody has a slice. Did she cut the cake in sixths, or in eighths?



sixths

eighths



Overview



Play



Previous



Skip



Give up