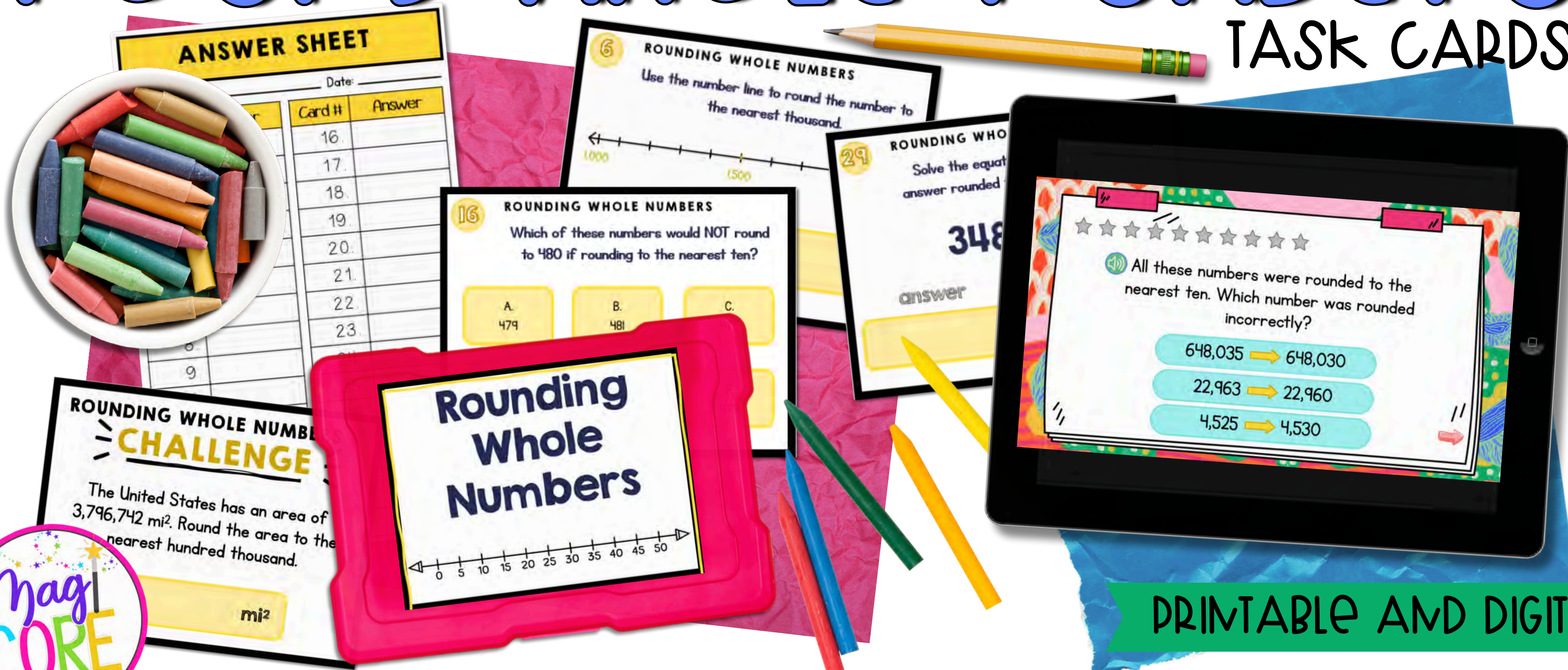


4.NBT.A.3

ROUND WHOLE NUMBERS

TASK CARDS



ANSWER SHEET

Date: _____

Card #	Answer
16.	
17.	
18.	
19.	
20.	
21.	
22.	
23.	

6 ROUNDOING WHOLE NUMBERS
Use the number line to round the number to the nearest thousand.



16 ROUNDOING WHOLE NUMBERS
Which of these numbers would NOT round to 480 if rounding to the nearest ten?

- A. 479
- B. 481
- C.

29 ROUNDOING WHOLE NUMBERS
Solve the equation. Round the answer rounded to the nearest ten.

348

answer

★ ★ ★ ★ ★ ★ ★ ★ ★ ★
All these numbers were rounded to the nearest ten. Which number was rounded incorrectly?

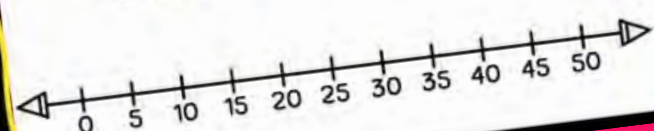
- 648,035 → 648,030
- 22,963 → 22,960
- 4,525 → 4,530

ROUNDOING WHOLE NUMBERS
CHALLENGE

The United States has an area of 3,796,742 mi². Round the area to the nearest hundred thousand.

mi²

Rounding Whole Numbers



Magi CORE

PRINTABLE AND DIGITAL

- 30 PRINT-AND-GO TASK CARDS
- READY TO USE FOR CENTERS

7 ROUNDRNG WHOLE NUMBERS
All these numbers were rounded to the nearest million. Which number was rounded incorrectly?

A. 1,244,827 → 1,000,000

Rounding Whole Numbers

ANSWER SHEET

Name: _____ Date: _____

Card #	Answer	Card #	Answer
1		16	
2		17	
		18	
		19	
		20	
		21	
		22	
		23	
		24	
		25	

25 ROUNDRNG WHOLE NUMBERS
Round the number to different place values.

Number	Nearest Thousand	Nearest Ten Thousand
682,114		

26 ROUNDRNG WHOLE NUMBERS
Round the number to different place values.

Number	Nearest Ten Thousand	Nearest Hundred Thousand
94,325		

27 ROUNDRNG WHOLE NUMBERS
Round the number to different place values.

Number	Nearest Hundred	Nearest Thousand
16,384		

28 ROUNDRNG WHOLE NUMBERS
Round the number to different place values.

Number	Nearest Hundred Thousand	Nearest Million
6,224,883		

ROUNDING WHOLE NUMBERS CHALLENGE

The United States has an area of 3,796,742 mi². Round the area to the nearest hundred thousand.

mi²



SELF CORRECTING, INCLUDES REPORTING CERTIFICATE



1 ROUNING WHOLE NUMBERS
Use the number line to round the number to the nearest ten.

4,830 4,834 4,840

4,834

[]

3 ROUNING WHOLE NUMBERS
Use the number line to round the number to the nearest hundred.

[]

★ ★ ★ ★ ★ ★ ★ ★ ★ ★

17 ROUNING WHOLE NUMBERS
There is a number on the board. Carl rounded it on his notebook. He rounded it to the nearest _____.

4,552

4,600

ten
hundred
thousand

[]

17 ROUNING WHOLE NUMBERS
There is a number on the board. Carl rounded it on his notebook. He rounded it to the nearest _____.

4,552

ten

18 ROUNING WHOLE NUMBERS
There is a number on the board. Amanda rounded it on her notebook. She rounded it to the nearest _____.

1,832

2,000

hundred
thousand
ten thousand

20 ROUNING WHOLE NUMBERS
There is a number on the board. David rounded it on his notebook. He rounded it to the nearest _____.

14,552

14,000

ten thousand
hundred thousand
million



SHUFFLES CARDS, SO STUDENTS CAN PRACTICE MORE THAN ONCE

ROUNDING WHOLE NUMBERS
All these numbers were rounded to the nearest ten thousand. Which number was rounded incorrectly?
A. 679,099 → 680,000

ROUNDING WHOLE NUMBERS
All these numbers were rounded to the nearest hundred. Which number was rounded incorrectly?
A.
B.
C.

ROUNDING WHOLE NUMBERS
All these numbers were rounded to the nearest million. Which number was rounded incorrectly?
A. 1,244,827 → 1,000,000
B. 1,685,362 → 1,000,000
C. 2,301 → 9,000,000

ANSWER SHEET

Name: _____ Date: _____

Card #	Answer	Card #
1		16
2		17
3		18
4		19
		20

★ ★ ★ ★ ★ ★ ★ ★ ★ ★

🔊 Round the number to different place values.

Number	Nearest Ten	Nearest Hundred
876		

ROUNDING WHOLE NUMBERS CHALLENGE

The United States has an area of 3,796,742 mi². Round the area to the nearest hundred thousand.

_____ mi²

ROUNDING WHOLE NUMBERS
Round the number to different place values.

Nearest Ten Thousand	Nearest Hundred Thousand



STANDARDS ALIGNED

22 ROUNDRNG WHOLE NUMBERS

There is a number on the board. Chloe rounded it on her notebook. She rounded it to the nearest _____.

76,082

76,100

ten thousand
thousand
hundred

30 ROUNDRNG WHOLE NUMBERS

Solve the equation. Then, rewrite the answer rounded to the nearest hundred.

$275,112 + 98,657$

answer rounded

13 ROUNDRNG WHOLE NUMBERS

Which of these numbers would NOT round to 360 if rounding to the nearest ten?

A. 362
B. 358
C. 365
D. 363
E. 359
F. 361

ROUNDRNG WHOLE NUMBERS

CHALLENGE

The United States has an area of 3,796,742 mi². Round the area to the nearest hundred thousand.

mi²


23 ROUNDRNG WHOLE NUMBERS

Round the number to different place values.

Number	Nearest Hundred
45,165	



USE OVER AND OVER FOR CENTERS, GAMES, AND REVIEW



ANSWER SHEET

Name: _____ Date: _____

Card #	Answer	Card #	Answer
1		16	
2		17	
3		18	
4		19	
5		20	
6		21	
7		22	
8		23	
9		24	

25 ROUNING WHOLE NUMBERS
Round the number to different place values.

Number	Nearest Thousand	Nearest Ten Thousand
682,114		

26 ROUNING WHOLE NUMBERS
Round the number to different place values.

Number	Nearest Ten Thousand	Nearest Hundred Thousand
94,325		

27 ROUNING WHOLE NUMBERS
Round the number to different place values.

Number	Nearest Hundred	Nearest Thousand
16,384		

28 ROUNING WHOLE NUMBERS
Round the number to different place values.

Number	Nearest Ten Thousand	Nearest Hundred Thousand
6,224,883		

29 ROUNING WHOLE NUMBERS
Solve the equation. Then, rewrite the answer rounded to the nearest thousand.

348×10

answer _____ rounded _____

CHALLENGE

The United States has an area of 3,796,742 square miles. Round the area to the nearest hundred thousand.

mi²

9 ROUNING WHOLE NUMBERS
All these numbers were rounded to the nearest ten thousand. Which number was rounded incorrectly?

A. 1,000

B. 10,000

C. 100,000

10 ROUNING WHOLE NUMBERS
All these numbers were rounded to the nearest hundred. Which number was rounded incorrectly?

A. 1,478 → 1,500

B. 12,605 → 12,700

C. 97,096 → 97,100

12 ROUNING WHOLE NUMBERS
All these numbers were rounded to the nearest hundred. Which number was rounded incorrectly?

A. 684 → 600

B. 796 → 800

C. 250 → 300

WHOLE NUMBERS
Which numbers would NOT round to the nearest ten?

A. 81

B. 486

C. 475

D. 484

E. 484

F. 478

6 ROUNING WHOLE NUMBERS
Use the number line to round the number to the nearest thousand.

1,500

1,500

