



- 30 PRINT-AND-GO TASK CARDS
- READY TO USE FOR CENTERS

## ANSWER SHEET

Name: \_\_\_\_\_ Date: \_\_\_\_\_

Card #	Answer	Card #
1		16
2		17
		18
		19
		20
		21
		22
		23
		24
		25



**9** FACTORS AND MULTIPLES

Choose the number pairs that are factors of 19.

A. 15, 4      B. 1, 19

C. 20, 1      D. 6, 3

**11** FACTORS AND MULTIPLES

Which numbers are multiples of 2?

1 2 3 4 5

6 7 8 9 10

**10** FACTORS AND MULTIPLES

Choose the number pairs that are factors of 7.

A. 5, 2      B. 2, 3

C. 3, 4      D. 7, 1

**12** FACTORS AND MULTIPLES

Which numbers are multiples of 5?

1 2 3 4 5

6 7 8 9 10

**30** FACTORS AND MULTIPLES

Is the number prime or composite?

**17**

**Pairing Factors**

**FACTORS AND MULTIPLES CHALLENGE**

I am an even number. I am a multiple of both 2 and 4. My value is less than 12. Which number am I?



# SELF CORRECTING, INCLUDES REPORTING CERTIFICATE



17 FACTORS AND MULTIPLES  
What are the first 4 multiples of the number  
**7**

19 FACTORS AND MULTIPLES  
What are the first 4 multiples of the number?  
**9**



1 FACTORS AND MULTIPLES  
Complete the factor pair chart.  
**4**

2 FACTORS AND MULTIPLES  
Complete the factor pair chart.  
**6**

14 FACTORS AND MULTIPLES  
Complete the factor pair chart.  
**16**

CERTIFICATE OF COMPLETION

Patrick  
has scored 10 / 10  
on Place Value Task  
Cards.

[CLICK TO PRINT](#)





# STANDARDS ALIGNED

**21** FACTORS AND MULTIPLES

This number is a multiple of 2 and 12.

A. 18      B. 36

C. 26      D. 10

**14** FACTORS AND MULTIPLES

Which numbers are multiples of 10?

5	10	15	20	25
30	35	40	45	50

**5** FACTORS AND MULTIPLES

Complete the factor pair chart.

18

1	2	3			
---	---	---	--	--	--

**FACTORS AND MULTIPLES CHALLENGE**


I am an even number. I am a multiple of both 2 and 4. My value is less than 12. Which number am I?

**29** FACTORS AND MULTIPLES


Is the number prime or composite?

3

Prime      Composite



# USE OVER AND OVER FOR CENTERS, GAMES, AND REVIEW



**ANSWER SHEET**

Name: \_\_\_\_\_ Date: \_\_\_\_\_

Card #	Answer	Card #	Answer
1		16	
2		17	
3		18	
4		19	
5		20	
6		21	
7		22	
8		23	
9		24	
10		25	
11		26	
12		27	

**ANSWER SHEET**

Name: \_\_\_\_\_ Date: \_\_\_\_\_

Card #	Answer	Card #	Answer
13		16	
14		17	
15		18	
16		19	
17		20	
18		21	
19		22	
20		23	
21		24	
22		25	
23		26	
24		27	

**FACTORS AND MULTIPLES**

Choose the number pairs that are factors of 20.

A. 5, 4      B. 3, 7

**FACTORS AND MULTIPLES CHALLENGE**

I am an even number. I am a multiple of both 2 and 4. My value is less than 12. Which number am I?

**FACTORS AND MULTIPLES**

Complete the factor pair chart.

4

```

    graph TD
      4 --- 2
      4 --- 
    
```

**FACTORS AND MULTIPLES**

Complete the factor pair chart.

6

```

    graph TD
      6 --- 1
      6 --- 
      6 --- 3
      6 --- 
    
```

**FACTORS AND MULTIPLES**

Complete the factor pair chart.

12

```

    graph TD
      12 --- 3
      12 --- 
      12 --- 
      12 --- 12
    
```

**FACTORS AND MULTIPLES**

Complete the factor pair chart.

16

```

    graph TD
      16 --- 1
      16 --- 2
      16 --- 4
      16 --- 
      16 --- 
      16 --- 
    
```

**FACTORS AND MULTIPLES**

What are the first 4 multiples of the number?

7

**FACTORS AND MULTIPLES**

What are the first 4 multiples of the number?

8

**FACTORS AND MULTIPLES**

What are the first 4 multiples of the number?

9

**FACTORS AND MULTIPLES**

What are the first 4 multiples of the number?

11

**FACTORS AND MULTIPLES**

This number is a multiple of 5 and 10.

A. 25      B. 42  
C. 35      D. 20

**FACTORS AND MULTIPLES**

Which numbers are multiples of 4?

2 4 6 8 10  
12 14 16 18 20