

Florida B.E.S.T.



1ST GRADE MATH

Complete Curriculum

WORD PROBLEMS
Adding to 20 with 3 Numbers

UNKNOWN NUMBER

WORD PROBLEMS
Adding & Subtracting to 20

RELATE ADDITION & SUBTRACTION
as an unknown addend

COUNTING
To 120

ESTIMATE MEASURE
&
To the Nearest Inch

SUBTRACT WITHIN 100
digit from a 2

**1 MORE, 1 LESS
10 MORE, 10 LESS**
Adding & Subtracting 1 & 10

ADD AND SUBTRACT WITHIN 20
only within 10

Strategies to ADD TO 100

TELLING TIME
To the Hour or Half Hour

COMPARE AND ORDER
by length

READ & WRITE
Numbers to 100

COMPARING NUMBERS

COLLECT AND INTERPRET DATA
Tally marks

LACE VALUE
Tens & Ones

MONEY
Coins & Dollars

GEOMETRY
IN THE WORLD


SHAPES
2D & 3D

FRACTIONS
Partition Halves & Fourths







Ali the Alligator

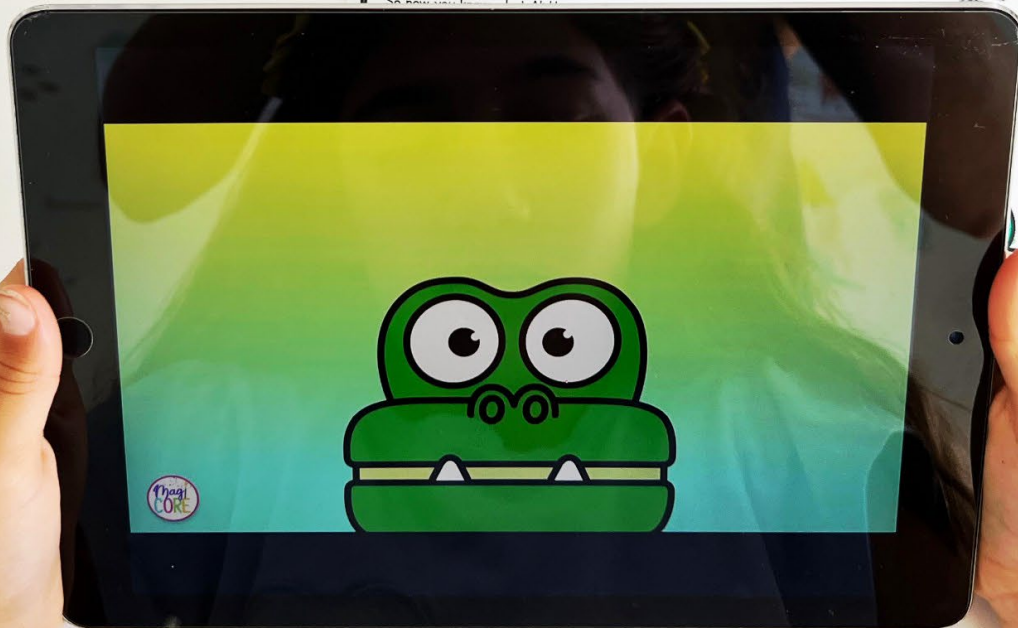


Hey, hey, hey, what do you say?
Ali the Alligator is hungry today!
And she munches on numbers yum yum me
But Ali only eats the larger one you see
Not the numbers that are less than or equal to
So, we have to compare every number at the zoo
If you pick the right one, she will open her mouth
Here are a few numbers let's try it out!


32 is greater than 18 you see
Ali is gonna be hap hap happy
41 is equal to 41
It is not more than, so she says uh uh
And 74 is less than 92
Ali won't eat that it just won't do



So now you know what Ali



Original videos and songs!



Meet Ali the Alligator.
Ali loves to eat numbers.

©Julie Sachse

Circle the number that Ali would eat.



Ali is a hungry Alligator. She always wants to eat
the _____ (bigger/ smaller) number.

©Julie Sachse

- Lesson Plans
- Worksheets
- Vocabulary
- Games
- Assessments

Number Line

Order

Less Than

Greater Than

Water Th

Name: _____

Hungry Alligator

Directions: Draw the <, > or = symbol to complete.

Name: _____ Date: _____

Hungry Alligator

Directions: Cut out the Alligator Pictures on the following page. Paste them in the circles to show which number she would want to eat.

1. 11  35

2. 3  13

3.  78

4. 68  81

5. 99  19

6. 97  98


7. 70  58


8. 45  54


9. 60  29

10. 18  13

© Julie Bochner

4. 

5. 

6. 



Name: _____ Date: _____

Problem Solver

Solve the word problems. Use whichever strategy you want to solve the equation.

1. There are 12 butterflies in the garden. 7 of those butterflies are orange-spotted butterflies. The other butterflies are purple-spotted butterflies. How many purple-spotted butterflies are there?



2. Mrs. Quinn brought 17 pieces of candy for her class. Mrs. Hugh brought 9 pieces of candy for her class. How many more pieces of candy did Mrs. Quinn bring than Mrs. Hugh?

