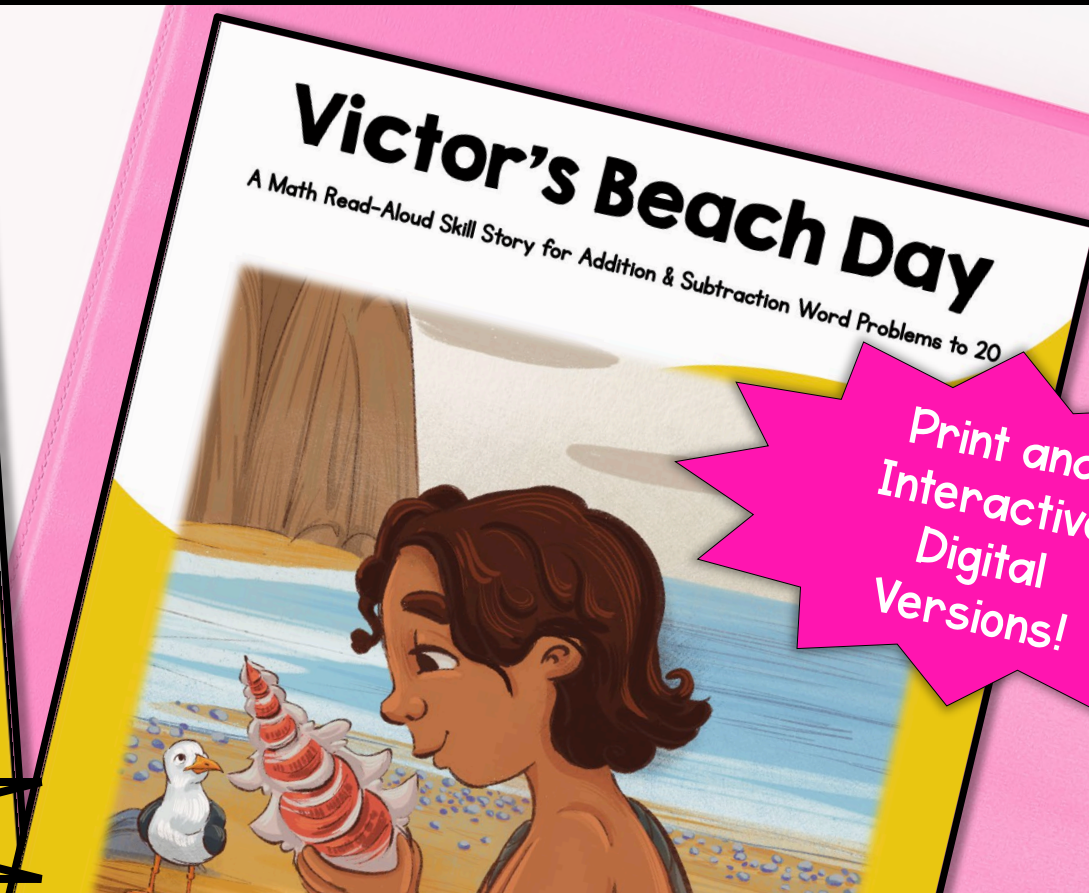
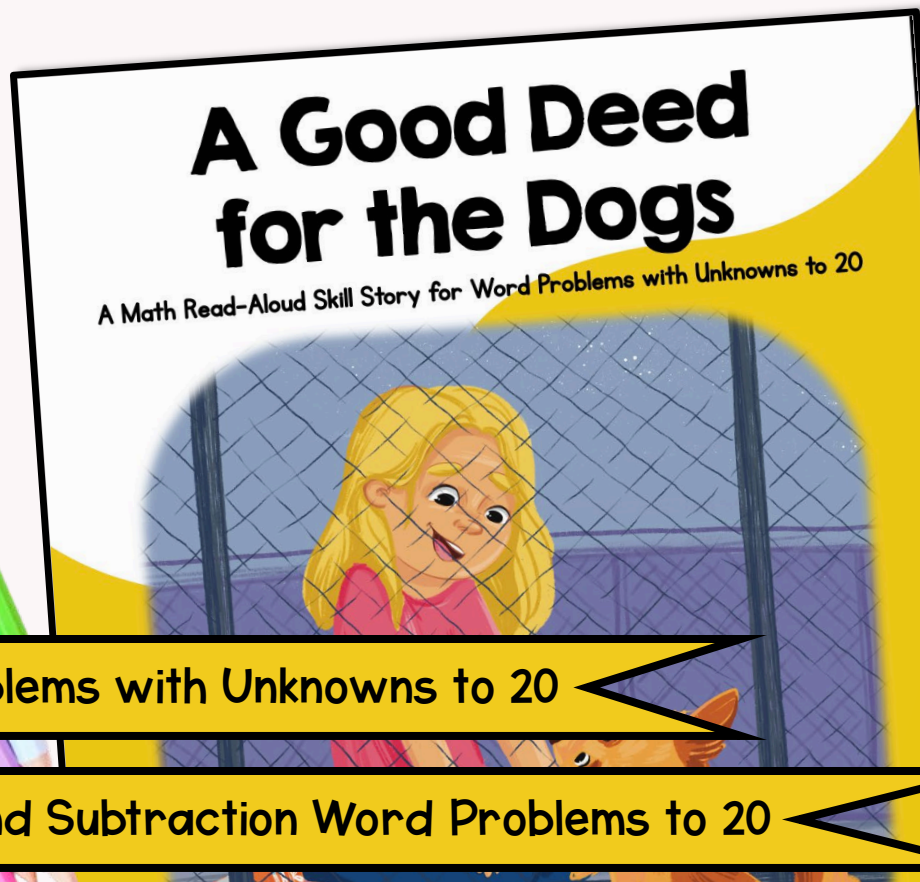


# MATH STORIES

Math Read-Aloud Skill Stories

## SET 3: WORD PROBLEMS



Print and Interactive Digital Versions!

Word Problems with Unknowns to 20

Addition and Subtraction Word Problems to 20



# WHAT'S INSIDE?



**PRINTABLE** PDFs and **INTERACTIVE DIGITAL VERSIONS** included.

- Engaging math read-aloud skill stories
- “STOP AND SOLVE” tasks throughout each story
- AND links to interactive digital versions

**Printable Slides &  
Digital Links Included**



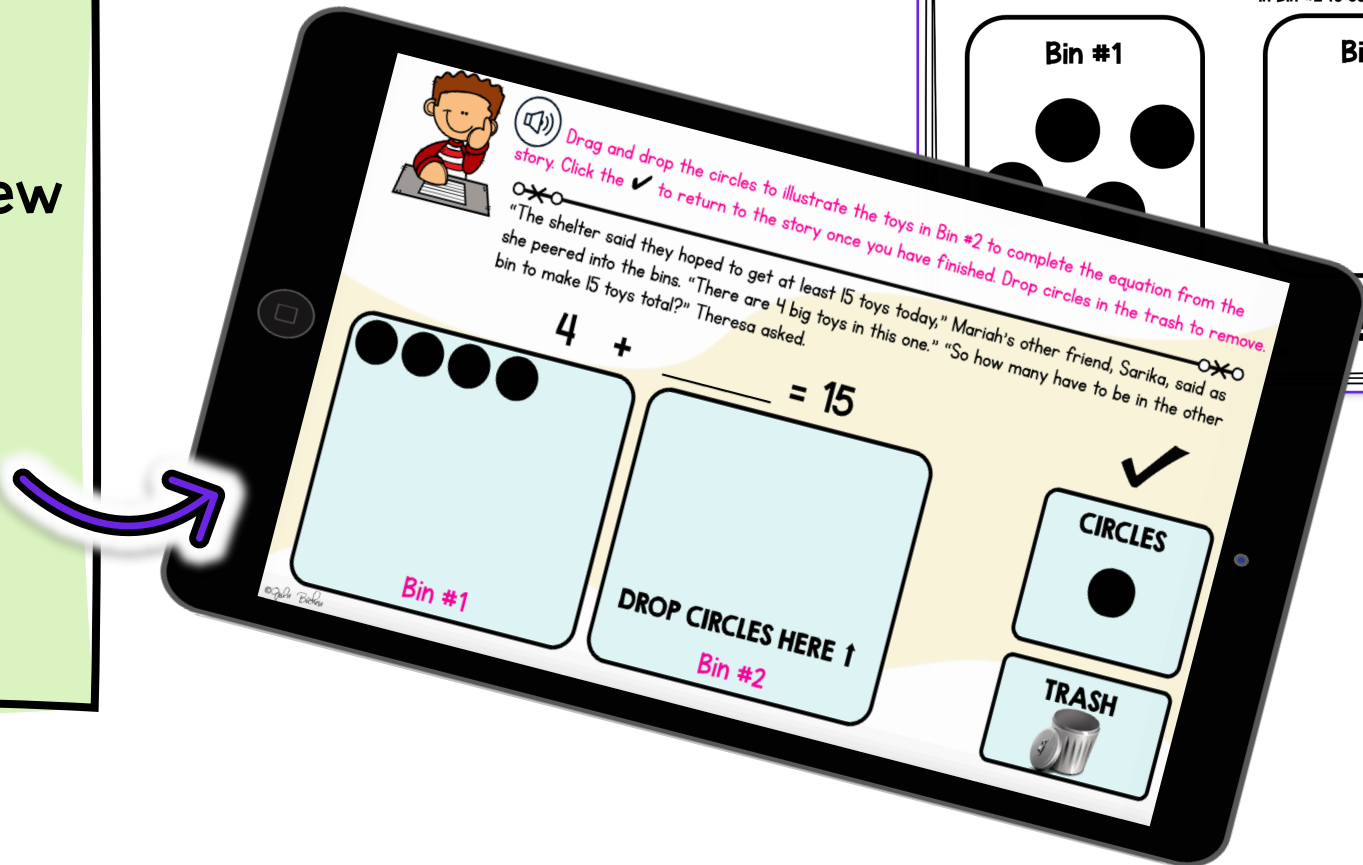
# 2 ENGAGING MATH STORIES

- Activities targeting essential math skills.
- Teachers can quickly check student work.
- Exciting narrative stories to keep students engaged.
- Cross-curricular practice.



# STANDARD ALIGNED


- Skill-focused, scaffolded activities
- Great for end of unit review and scaffolded review throughout the year
- Set 3 including:
  - CCSS 1.OA.A.1
  - FL BEST MA.1.AR.1.2





They all scurried over to the two bins containing toys.

"The shelter said they hoped to get at least 15 toys today," Mariah's other friend, Sarika, said as she peered into the bins. "There are 4 big toys in this one."

"So how many have to be in the other bin to make 15 toys total?" Theresa asked.


 STOP AND SOLVE

 Draw & Write  Draw circles to illustrate the toys in Bin #2 to complete the equation.

Bin #1

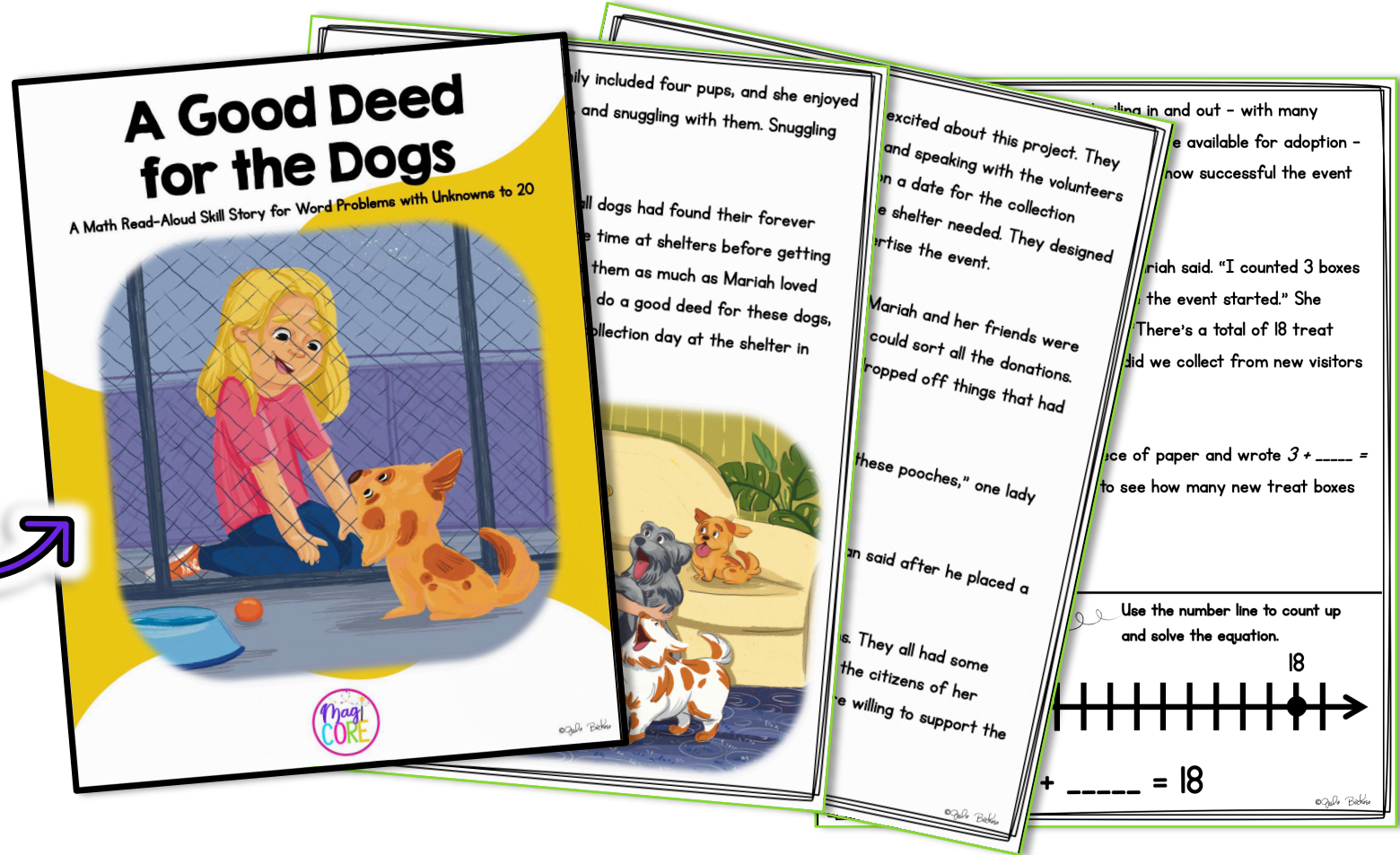
Bin #2

$4 + \quad = 15$



# READ ALOUD

- Engage in whole class instruction with an interactive read-aloud
- Read-aloud to students while they follow along with the story
- "STOP AND SOLVE" activities for skills-based practice along the way



**A Good Deed for the Dogs**  
A Math Read-Aloud Skill Story for Word Problems with Unknowns to 20

...ily included four pups, and she enjoyed  
and snuggling with them. Snuggling

...ll dogs had found their forever  
e time at shelters before getting  
them as much as Mariah loved  
do a good deed for these dogs,  
ollection day at the shelter in

...excited about this project. They  
and speaking with the volunteers  
on a date for the collection  
e shelter needed. They designed  
rtise the event.

...riah said. "I counted 3 boxes  
the event started." She  
There's a total of 18 treat  
did we collect from new visitors

...se of paper and wrote  $3 + \text{---} =$   
to see how many new treat boxes

...these pooches," one lady

...an said after he placed a

...s. They all had some  
the citizens of her  
e willing to support the

Use the number line to count up  
and solve the equation.



18

$+ \text{---} = 18$

Magi CORE

# DIGITAL VERSION


- Same format as the print version
- Perfect for individual activity and small groups
- Audio playback buttons to read-aloud the story to students
- Interactive "STOP AND SOLVE" activities

  Cross off the peaches that were eaten to find how many peaches are left. Click a peach to cross it off. Type the answer in the blue box below. Click the ✓ in the bottom right corner to return to the story once you have finished.

Auntie Sofia opened the cooler and peered inside. "I had 8 peaches in here, but we just ate 3. How many peaches are left in the cooler?"

8 - \_\_\_ =  ✓

# TAKE A PEEK



"How many more people donated supplies since you counted the first time?" Mariah asked.

Sarika wrote  $\text{_____} + 12 = 20$  on the paper.

Theresa pulled 12 supplies from the group of 20, and Mariah counted the toys that remained.

 STOP AND SOLVE

 Write & Draw  $\Sigma$  Cross off 12 supplies from the group to see how many remain.



©Zula Bakker

"We have 8 toys here, so 8 plus 12 equals 20. Eight more people donated supplies," Mariah said.

"Some people also donated gift cards to pet supply stores," Sarika reminded them. "Miss Veronica who volunteers at the shelter collected those."

The girls found Miss Veronica cleaning one of the kennels. She finished and then led the girls to the office. "We collected a total of 19 gift cards," Miss Veronica said, "but I already gave some away when visitors today adopted pups. Now there are 16 gift cards left, so how many did I give away?"

 STOP AND SOLVE

 Write & Draw  $\Sigma$  Shade in 16 gift cards to show how many you have and see how many remain.



©Zula Bakker

Theresa wrote  $19 - \text{_____} = 16$  on the paper, then she drew 19 little rectangles. "These are the 19 gift cards we received." She crossed out one, then another, then another. "Now there are 16 rectangles, so we gave away 3 gift cards today."


"I think your collection event was a success, girls!" Miss Veronica said. "The shelter now has more treats, more toys, more supplies, and more gift cards because of your efforts. Thank you so much!"



"And some dogs were adopted today too," Mariah said. "The shelter had 14 pups at the beginning of the day." She stepped out to where the kennels were and walked along the center aisle. "Now there are only 10 dogs left."



# AND ANOTHER PEEK



Warm sunshine beat down on Victor as he hauled a huge tote bag full of sand toys onto the beach. His mom and his aunt were ahead of him scoping out the best spot to set up for a fun day of swimming and sandcastle building. Miles of white sand stretched out in either direction, and the sky was bluer than Victor had ever seen it. He just knew they were all going to have the best day ever.



"How about this spot?" Auntie Sofia said. "It's close to the water but far enough away that our sandcastles won't be in danger of getting flooded."

"Looks good to me." Mom unfolded a colorful blanket and spread it out while Auntie Sofia poked a beach umbrella into the sand and opened it. "Let's go hunting for seashells, Victor," Mom said. "I have some jewelry designs I want to make with them."

Victor put the bag of sand toys down. After applying sunscreen, he followed Mom along the shore. They stopped every now and then to pick up a seashell. By the time they were done with their walk, he and Mom each had pockets full of shells. They headed back to Auntie Sofia who was flipping through a magazine as she reclined in a beach chair.



Victor knelt on the blanket next to Mom, and they both emptied their pockets. "I picked up 7 shells," he said.

Mom looked them over and smiled. "They're good ones too. Perfect for my jewelry designs." She counted up her shells. "I found 12 shells."

"If you found 12 shells and Victor found 7, how many did you find altogether?" Auntie Sofia asked after offering Mom and Victor drinks from the cooler beside her chair.

Click here to



and





solve



How many shells did they collect altogether? Type the answer in the blue box below. Click the ✓ in the bottom right corner to return to the story once you have finished.

"If you found 12 shells and Victor found 7, how many did you find altogether?" Auntie Sofia asked after offering Mom and Victor drinks from the cooler beside her chair.



$$12 + 7 = \boxed{?}$$

